

BAHRIA COLLEGE ZAFAR CAMPUS E-8 ISLAMABAD

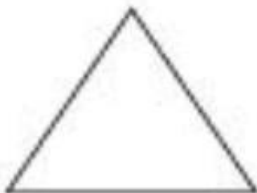
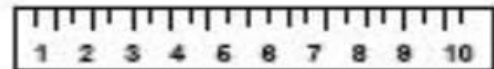

MATHS WORKSHEET

MONTESSORI ADVANCE

Name: \_\_\_\_\_

Teacher Name: MISS NAZIA

Draw a line to match the shapes.



BAHRIA COLLEGE ZAFAR CAMPUS E-8 ISLAMABAD

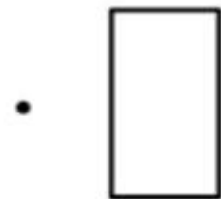
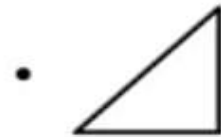

MATHS WORKSHEET

MONTESSORI ADVANCE

Name: \_\_\_\_\_

Teacher Name: MISS NAZIA

Draw a line to match each shape.



BAHRIA COLLEGE ZAFAR CAMPUS E-8 ISLAMABAD





MATHS WORKSHEET

MONTESSORI ADVANCE

Name: \_\_\_\_\_

Teacher Name: MISS NAZIA

Count and Match.



5

4

2

3

6

1

**BAHRIA COLLEGE ZAFAR CAMPUS E-8 ISLAMABAD**

**MATHS WORKSHEET**

**MONTESSORI ADVANCE**

Name: \_\_\_\_\_

Teacher Name: MISS NAZIA

**Big or Small**

Look at the objects in each of the four sections.  
Color the big object red and the small object orange.



**BAHRIA COLLEGE ZAFAR CAMPUS E-8 ISLAMABAD**

**MATHS WORKSHEET**

**MONTESSORI ADVANCE**

Name: \_\_\_\_\_

Teacher Name: MISS NAZIA

Count and match with correct number



5



3



4



1



2