

BAHRIA COLLEGE ZAFAR CAMPUS

E.8 ISLAMABAD

Class: Prep

Worksheet :Maths(18)

Topic:Subtraction Sums

Q.1 Solve these Subtraction Sums.

Subtract the given numbers by crossing out the objects.

Example:



$$6 - 1 = 5$$



$$8 - 4 = \square$$



$$6 - 5 = \square$$



$$4 - 2 = \square$$



$$3 - 1 = \square$$



$$6 - 3 = \square$$

BAHRIA COLLEGE ZAFAR CAMPUS

E.8 ISLAMABAD

Class : Prep

Worksheet : Maths(4)

Topic: Missing No's

Q.1 Fill in the Missing Numbers.

Fill in the Missing Numbers

1	2		4		6	7			10
	12	13		15			18	19	20
21		23	24		26		28		
	32		34	35		37		39	40
41			44	45	46		48		
	52	53		55		57		59	60
	62		64		66		68		70
71	72	73			76	77		79	
81	82			85			88	89	
	92	93		95		97	98		

BAHRIA COLLEGE ZAFAR CAMPUS

E.8 ISLAMABAD

Class : Prep

Worksheet : Maths(3)

Topic: B.W.C

Q.1 Write B.W.C from 40 to 0.

TO	TO	TO	TO	TO
40	30	20	10	0
39	29	19	9	
38	28	18	8	
37	27	17	7	
36	26	16	6	
35	25	15	5	
34	24	14	4	
33	23	13	3	
32	22	12	2	
31	21	11	1	

BAHRIA COLLEGE ZAFAR CAMPUS



E.8 ISLAMABAD



Class: Prep



Worksheet :Maths(14)



Topic:Addition Sums



Q.1 Count and Write.



 **Adding Balloons : Up to 10!** 
Solve the addition problems below!



1.
$$\begin{array}{r} 4 \\ + 2 \\ \hline \end{array}$$
 




2.
$$\begin{array}{r} 6 \\ + 1 \\ \hline \end{array}$$
 




3.
$$\begin{array}{r} 5 \\ + 2 \\ \hline \end{array}$$
 


4.
$$\begin{array}{r} 3 \\ + 3 \\ \hline \end{array}$$
 


5.
$$\begin{array}{r} 4 \\ + 0 \\ \hline \end{array}$$
 


6.
$$\begin{array}{r} 5 \\ + 4 \\ \hline \end{array}$$
 


7.
$$\begin{array}{r} 6 \\ + 3 \\ \hline \end{array}$$
 


8.
$$\begin{array}{r} 7 \\ + 3 \\ \hline \end{array}$$
 


BAHRIA COLLEGE ZAFAR CAMPUS

E.8 ISLAMABAD

Worksheet: Maths(2)

Class :Prep

Topic: F.W.C

Q.1 Write F.W.C from 150 to 200.

HTO	HTO	HTO	HTO	HTO	HTO
150	160	170	180	190	200
151	161	171	181	191	
152	162	172	182	192	
153	163	173	183	193	
154	164	174	184	194	
155	165	175	185	195	
156	166	176	186	196	
157	167	177	187	197	
158	168	178	188	198	
159	169	179	189	199	

BAHRIA COLLEGE ZAFAR CAMPUS

E.8 ISLAMABAD

Class: Prep

Worksheet :Maths(16)

Topic:Addition Sums

Q.1 Count and Write.

$$\begin{array}{r} 1) \quad 34 \\ + 23 \\ \hline 57 \end{array}$$

$$\begin{array}{r} 7) \quad 51 \\ + 26 \\ \hline 77 \end{array}$$

$$\begin{array}{r} 13) \quad 15 \\ + 52 \\ \hline 67 \end{array}$$

$$\begin{array}{r} 19) \quad 73 \\ + 5 \\ \hline 78 \end{array}$$

$$\begin{array}{r} 2) \quad 43 \\ + 6 \\ \hline 49 \end{array}$$

$$\begin{array}{r} 8) \quad 27 \\ + 41 \\ \hline 68 \end{array}$$

$$\begin{array}{r} 14) \quad 62 \\ + 31 \\ \hline 93 \end{array}$$

$$\begin{array}{r} 20) \quad 55 \\ + 14 \\ \hline 69 \end{array}$$

$$\begin{array}{r} 3) \quad 73 \\ + 6 \\ \hline 79 \end{array}$$

$$\begin{array}{r} 9) \quad 52 \\ + 34 \\ \hline 86 \end{array}$$

$$\begin{array}{r} 15) \quad 27 \\ + 41 \\ \hline 68 \end{array}$$

$$\begin{array}{r} 21) \quad 39 \\ + 50 \\ \hline 89 \end{array}$$

$$\begin{array}{r} 4) \quad 13 \\ + 64 \\ \hline 77 \end{array}$$

$$\begin{array}{r} 10) \quad 81 \\ + 6 \\ \hline 87 \end{array}$$

$$\begin{array}{r} 16) \quad 42 \\ + 56 \\ \hline 98 \end{array}$$

$$\begin{array}{r} 22) \quad 33 \\ + 25 \\ \hline 58 \end{array}$$

$$\begin{array}{r} 5) \quad 74 \\ + 14 \\ \hline 88 \end{array}$$

$$\begin{array}{r} 11) \quad 47 \\ + 22 \\ \hline 69 \end{array}$$

$$\begin{array}{r} 17) \quad 34 \\ + 60 \\ \hline 94 \end{array}$$

$$\begin{array}{r} 23) \quad 15 \\ + 73 \\ \hline 88 \end{array}$$

$$\begin{array}{r} 6) \quad 27 \\ + 51 \\ \hline 78 \end{array}$$

$$\begin{array}{r} 12) \quad 45 \\ + 4 \\ \hline 49 \end{array}$$

$$\begin{array}{r} 18) \quad 25 \\ + 31 \\ \hline 56 \end{array}$$

$$\begin{array}{r} 24) \quad 36 \\ + 63 \\ \hline 99 \end{array}$$

BAHRIA COLLEGE ZAFAR CAMPUS

E.8 ISLAMABAD

Class: Prep

Worksheet: Maths(21)

Topic: What comes before

Q.1 Fill in the blanks that comes before.

Before

← 54

← 67

← 82

← 79

← 38

← 90

BAHRIA COLLEGE ZAFAR CAMPUS

E.8 ISLAMABAD

Class : Prep


Worksheet :Maths(6)

Topic: Missing No's

Q.3 Fill in the Missing Numbers.

Name..... Class..... Date.....

Write the missing numbers with our Friendly Frog



51 53 56

62 59 57

64 66 68

74 73 71

77 78 80

88 85 83

90 91 94

100 98 97

LearningApps.com

BAHRIA COLLEGE ZAFAR CAMPUS

E.8 ISLAMABAD

Class: Prep

Worksheet :Maths(19)

Topic:Subtraction Sums

Q.1 Solve these Subtraction Sums.

Subtraction (1-10) - Cross off and find result

$$\begin{array}{r} 5 \quad \text{🍓🍓🍓🍓🍓} \\ - 3 \quad \text{// // //} \\ \hline \end{array}$$

$$\begin{array}{r} 8 \quad \text{🍓🍓🍓🍓🍓🍓🍓🍓} \\ - 4 \quad \text{🍓🍓🍓🍓} \\ \hline \end{array}$$

$$\begin{array}{r} 4 \quad \text{🍓🍓🍓🍓} \\ - 2 \\ \hline \end{array}$$

$$\begin{array}{r} 6 \quad \text{🍓🍓🍓🍓🍓🍓} \\ - 4 \quad \text{🍓} \\ \hline \end{array}$$

$$\begin{array}{r} 4 \quad \text{🍓🍓🍓🍓} \\ - 1 \\ \hline \end{array}$$

$$\begin{array}{r} 7 \quad \text{🍓🍓🍓🍓🍓🍓🍓} \\ - 5 \quad \text{🍓🍓} \\ \hline \end{array}$$

$$\begin{array}{r} 7 \quad \text{🍓🍓🍓🍓🍓🍓🍓} \\ - 7 \quad \text{🍓🍓} \\ \hline \end{array}$$

$$\begin{array}{r} 7 \quad \text{🍓🍓🍓🍓🍓🍓🍓} \\ - 2 \quad \text{🍓🍓} \\ \hline \end{array}$$

BAHRIA COLLEGE ZAFAR CAMPUS

E.8 ISLAMABAD

Class: Prep

Worksheet :Maths(15)

Topic:Addition Sums

Q.1 Count and Write.

$$\begin{array}{r} 1) \quad 37 \\ + 42 \\ \hline 79 \end{array} \quad \begin{array}{r} 2) \quad 51 \\ + 42 \\ \hline 93 \end{array} \quad \begin{array}{r} 3) \quad 42 \\ + 23 \\ \hline 65 \end{array}$$

$$\begin{array}{r} 4) \quad 25 \\ + 43 \\ \hline 68 \end{array} \quad \begin{array}{r} 5) \quad 33 \\ + 50 \\ \hline 83 \end{array} \quad \begin{array}{r} 6) \quad 48 \\ + 21 \\ \hline 69 \end{array}$$

$$\begin{array}{r} 7) \quad 25 \\ + 11 \\ \hline 36 \end{array} \quad \begin{array}{r} 8) \quad 26 \\ + 21 \\ \hline 47 \end{array} \quad \begin{array}{r} 9) \quad 42 \\ + 32 \\ \hline 74 \end{array}$$

$$\begin{array}{r} 10) \quad 42 \\ + 15 \\ \hline 57 \end{array} \quad \begin{array}{r} 11) \quad 34 \\ + 25 \\ \hline 59 \end{array} \quad \begin{array}{r} 12) \quad 23 \\ + 64 \\ \hline 87 \end{array}$$

BAHRIA COLLEGE ZAFAR CAMPUS

E.8 ISLAMABAD

Class: Prep

Worksheet: Maths(23)


Topic: What comes before & after

Q.1 Fill in the blanks that comes before & after.

Before and After

Fill in the numbers that comes before and after
the given number.

<input type="text"/> ← 94 → <input type="text"/>	<input type="text"/> ← 87 → <input type="text"/>
<input type="text"/> ← 79 → <input type="text"/>	<input type="text"/> ← 72 → <input type="text"/>
<input type="text"/> ← 63 → <input type="text"/>	<input type="text"/> ← 68 → <input type="text"/>
<input type="text"/> ← 12 → <input type="text"/>	<input type="text"/> ← 19 → <input type="text"/>
<input type="text"/> ← 96 → <input type="text"/>	<input type="text"/> ← 91 → <input type="text"/>
<input type="text"/> ← 26 → <input type="text"/>	<input type="text"/> ← 38 → <input type="text"/>
<input type="text"/> ← 33 → <input type="text"/>	<input type="text"/> ← 44 → <input type="text"/>
<input type="text"/> ← 57 → <input type="text"/>	<input type="text"/> ← 68 → <input type="text"/>
<input type="text"/> ← 56 → <input type="text"/>	<input type="text"/> ← 64 → <input type="text"/>



MATHS DIARY

BAHRIA COLLEGE ZAFAR CAMPUS

E.8 ISLAMABAD

Worksheet: Maths

Class :Prep

Q.1 Write F.W.C from 100 to 150.

HTO	HTO	HTO	HTO	HTO	HTO
100	110	120	130	140	150
101	111	121	131	141	
102	112	122	132	142	
103	113	123	133	143	
104	114	124	134	144	
105	115	125	135	145	
106	116	126	136	146	
107	117	127	137	147	
108	118	128	138	148	
109	119	129	139	149	

BAHRIA COLLEGE ZAFAR CAMPUS


E.8 ISLAMABAD

Class: Prep

Worksheet: Maths(22)

Topic: What comes after

Q.1 Fill in the blanks that comes after.



Name _____
Date _____

What Comes After

19 →	20	71 →	□
65 →	□	86 →	□
54 →	□	44 →	□
23 →	□	39 →	□
59 →	□	49 →	□

Grade
☆☆☆
☆☆

KidsPreschoolMagazine.com
© Copyright © 2011-2012

BAHRIA COLLEGE ZAFAR CAMPUS


E.8 ISLAMABAD

Class : Prep

, Worksheet : Maths(10)

Topic: Shapes

Q.1 Write the names of the shapes.



BAHRIA COLLEGE ZAFAR CAMPUS

E.8 ISLAMABAD

Class : Prep

Worksheet : Maths(8)

Topic: No's in words 21-30

Q.1 Write Numbers in words.

TO		Number's in words
21	=	twenty one
22	=	twenty two
23	=	twenty three
24	=	twenty four
25	=	twenty five
26	=	twenty six
27	=	twenty seven
28	=	twenty eight
29	=	twenty nine
30	=	thirty

BAHRIA COLLEGE ZAFAR CAMPUS

E.8 ISLAMABAD

Class: Prep

Worksheet: Maths(32)

Topic: Time (Making needles)




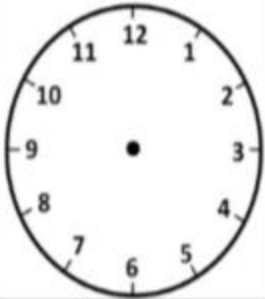
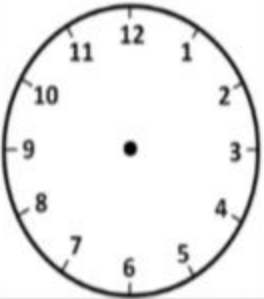

Name

Date



TELLING THE TIME - HALF PAST SHEET 2

Write the correct time underneath each clock. The first one has been done for you.

		
Half past 4	Half past 2	Half past 8
		
Half past 6	Half past 12	Half past 10

BAHRIA COLLEGE ZAFAR CAMPUS

E.8 ISLAMABAD

Class: Prep

Worksheet: Maths(29)







Topic: Concept of Time

Name

Date

TELLING THE TIME - O'CLOCK SHEET 1 ANSWERS



		
2 o'clock	5 o'clock	9 o'clock
		
11 o'clock	3 o'clock	6 o'clock

BAHRIA COLLEGE ZAFAR CAMPUS

E.8 ISLAMABAD

Class: Prep

Worksheet: Maths(30)

Topic: Concept of Time

Name

Date



**TELLING THE TIME - O'CLOCK & HALF PAST
SHEET 2 ANSWERS**



Half past 9



4 o'clock



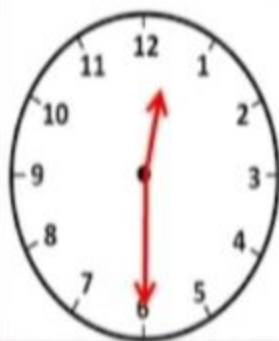
Half past 3



Half past 7



6 o'clock



Half past 12

BAHRIA COLLEGE ZAFAR CAMPUS

E.8 ISLAMABAD

Class: Prep

Worksheet: Maths(31)

Topic: Telling Time




Name

Date



TELLING THE TIME - HALF PAST SHEET 1

Write the correct time underneath each clock. The first one has been done for you.

		
Half past 2		
