

WORKSHEET
01
SUBJECT: COMPUTER
FOR
CLASS VIII
MRS NAHEEDA SHFIQUE

NETWORK AND COMMUNICATION


Q1: Circle the correct option given below:

- 1) Two or more computers connected together to exchange information with each other make:
 - (a) Computer system
 - (b) Computer network
 - (c) Computer architecture
 - (d) Computer program
- 2) The smallest computer network can be constructed by linking:
 - (a) Two computers
 - (b) Three computers
 - (c) Four computers
 - (d) Five computers
- 3) The central computer on the network is known as:
 - (a) Receiver
 - (b) Client
 - (c) Server
 - (d) Sender
- 4) The computers that use the resources on the server are called:
 - (a) Sender
 - (b) Receiver
 - (c) Client
 - (d) Server
- 5) Co-axial cable is also called:
 - (a) cock
 - (b) coax
 - (c) cox
 - (d) Coxs
- 6) A modem receives digital data from a computer, converts it into analog waves. The conversion is called :
 - (a) demodulator
 - (b) demodulation
 - (c) Modulator
 - (d) modulation

- 7) GPS technology is made possible by the following number of satellites around the Earth:
- (a) Receiver
 - (b) Client
 - (c) Server
- 8) A cell phone is basically a:
- (a) radio
 - (b) television
 - (c) camera
 - (d) Sound recorder
- 9) Blue tooth technology is based on :
- (a) Oceanic waves
 - (b) Light waves
 - (c) Radio waves
 - (d) Waves of the moon attraction
- 10) A single cable with multiple pairs of copper wires twisted around each other:
- (a) Fiber- optic cable
 - (b) Co-axial cable
 - (c) Twisted pair cable
 - (d) Electric cable

Q: Label the diagram .also name the type of cable.

Figure name : _____



Note: Write the answers for the following given questions: page numbers are mentions for your guidance:

Q: Define computer network. Pg 02

Ans:

Q: Write down the purposes for which computer networks are established?

Ans: Pg:02

- ---
- ---
- ---
- ---

Q: How many types of devices are necessary for communication to occur over a Network?

Ans: pg:03

- ---
- ---
- ---
- ---

Q: Define transmission medium.

Ans: pg:03

Q: Give the difference between Sending and Receiving devices with their names? Pg:03

Ans:

: Sending Devices	Receiving devices

Q: Define Communication devices? Pg: 03 or 07 (any one definition)

Ans:

Q: Define and explain Client- Server relationship?pg:03

Ans:

Q: Differentiate between Sever and Client? pg: 03 ,04

Ans:

Server	Client

Q: Name the types of computer networks? Pg 04

Ans:

- _____
- _____
- _____

Q: Explain in detail the difference between the LAN and WAN? Pg:04,06

Ans:

LAN	WAN

Q: Write the advantages and disadvantages of LAN? Pg:05

Ans: Advantages of LAN:

- _____

- _____

- _____

- _____

- _____

- _____

- _____

Disadvantages of LAN:

- _____
- _____

- _____

Q: : Write the advantages and disadvantages of WAN? pg: 06

Ans:

Advantages of WAN:

- _____

- _____

- _____

- _____

Disadvantages of WAN:

- _____

- _____

- _____

- _____

- _____

Q: Define MAN? Pg: 05

Ans: _____

Q: Define Modem and give the difference of modulation and demodulation?

Pg:07

Ans: Modem

Modulation

Demodulation

Q: What is Dial Up modem? Pg: 07

Ans:

Q: What is the difference between internal and external modem? Pg: 07

Ans:

Internal Modem	External Modem

Q: What is network interface card ? write its purpose also. Pg: 08

Ans:

Q: Define physical transmission media. Name its types. Pg:08

Ans:

- ---
- ---
- ---

Q: Define twisted pair cable .Name its types? Pg:08

Ans:

-
- _____
 - _____

Q: Define Coaxial cable? Pg: 09

Ans:

Q: Write advantages of Co-axial Cable: pg: 09

Ans:

- _____

- _____

Q: Explain Fiber Optic Cable in short? Pg:10

Ans:

Q: what is meant by cutting - edge technologies? Write some of their names .
pg:11

Ans:

- ---
- ---
- ---
- ---

Q: Define Cellular communication? (Give One line answer) pg :11

Ans:

Q: What is GPS? (Give One line answer) Pg: 14

Ans:

Q: Write any three applications of GPS? Pg: 14

Ans:

- ---
- ---
- ---

Q: Define Blue tooth ? pg: 14

Ans:

Q: Write any 4 advantages of Blue tooth? pg: 15

Ans:

- ---

- ---

- ---

- ---

Q: What are the limitations or disadvantages of blue tooth? pg: 15

Ans:

- ---

- ---

- ---

----- **END** -----

MRS NAHEEDA

WORKSHEET
02
SUBJECT: COMPUTER
FOR
CLASS VIII
MRS NAHEEDA SHFIQUE

COMPUTER SECURITY THREATS

Q1: Circle the correct option given below:

- 1) Keeping information safe on a computer is called:
 - (a) Computer threat
 - (b) Computer security
 - (c) Computer ethic
 - (d) Computer program
- 2) They get unauthorized access to computers and damage or steal the information :
 - (a) Malicious hackers
 - (b) Programmers
 - (c) Malicious code
 - (d) bankers
- 3) It is piece of code that copies itself in another program to modify it:
 - (a) worm
 - (b) adware
 - (c) spyware
 - (d) virus
- 4) This free software automatically displays advertisements to a computer while the program is running:
 - (a) worm
 - (b) adware
 - (c) spyware
 - (d) virus
- 5) It is famous antivirus program:
 - (a) Quick scan
 - (b) Norton
 - (c) worm
 - (d) adware
- 6) Unauthorized access to computer system is called:
 - (a) hacking
 - (b) scanning
 - (c) programming
 - (d) Data filtration

- 7) It just perform a scan of a computer 's system volume:
- (a) Full scan
 - (b) Quick scan
 - (c) Custom scan
 - (d) File scan
- 8) If the information in a disk is changed by virus that disk is said to be:
- (a) scanned
 - (b) infected
 - (c) rejected
 - (d) retrieved
- 9) Anything that cause a problem or change to computer information is called :
- (a) error
 - (b) Security threat
 - (c) threat
 - (d) scanning
- 10) These scanners are used to detect security holes in a computer server , Network etc:
- (a) hardware
 - (b) virus
 - (c) adware
 - (d) Vulnerability
- 11) A virus get activated as a result of certain activity called:
- (a) trigger
 - (b) starter
 - (c) initial
 - (d) None of the above
- 12) Viruses ,worm and adware spread through:
- (a) Infected flash drives
 - (b) E-mail attachments
 - (c) Surfing insecure website
 - (d) All of the above
- 13) Which of the following is/are purposes behind hacking:
- (a) Getting information to sell
 - (b) Getting computer services without paying for them
 - (c) Stealing or changing the information for malicious purpose
 - (d) All of above

- 14) Which of the following is/are valid virus scanning options :
- (a) Quick scan
 - (b) Full system scan
 - (c) Folder scan
 - (d) All of the above
- 15) Which of the following is not true about viruses:
- (a) A virus does not replicate itself
 - (b) A virus does not remain limited to one computer
 - (c) A virus can delete data in a computer
 - (d) A virus can change data in files

Note: Write the answers for the following given questions: page numbers are mentions for your guidance:

Q: Define computer security. Name the types of threats. Pg 20

Ans:

- ---
- ---
- ---
- ---
- ---

Q: Define Virus and what is host? Pg:21

Ans:

Q: What types of harms a virus can cause?write any 5. pg:21

Ans:

Q: What is worm? Give a key difference between virus and worm. Pg:21

Q: Name the types of worms. Pg:22

Ans:

- ---
- ---
- ---
- ---

Q: Define adware? Pg: 03 or 07 (any one definition)

Ans:

Q: Write down the ways through which adware is harmful? pg:22

Ans:

Q: who are Hackers. what are the purposes of their hacking? pg: 23

Ans:

Q: Write any two ways through which hackers access computers? Pg 23

Ans:

- ---

- ---

Q: How viruses ,worms, and adware spread?. Only names Pg:23,24

Ans:

- ---
- ---
- ---
- ---

Q: Define antivirus? List some widely used antivirus programs. pg: 24,25

Ans:

- _____
- _____
- _____
- _____

-----END-----

BAHRIA COLLEGE

ISLAMABAD

WORK SHEETS

GENERAL SCIENCE

CLASS 8

MRS:

Ghazala Sehar

FIRST TERM SYLLABUS

2020

CONTENTS

Page.No

Unit No.1	ATOM AND MOLECULES	03
Unit No.2	CHANGES IN MATTER	06
Unit No.5	CRYSTALS	09
Unit No.10	TRANSPORT IN LIVING ORGANISM	12
Unit No.13	LIGHT	15

NOTE:-

Complete all these worksheets neatly and vigilantly after reading the lessons & learn it for the preparation of exams.

BAHRIA COLLEGE E-8 ISLAMABAD

Class VIII

Worksheet

Unit No.1

Choose the correct answer given below:-

- I. The word atom meaning indivisible came from
A- Greek B-Latin C. French D.British
- II. Matter is made up of gold,wood water fire and earth was the belief of philosophers
A-Greek B- Chinese C-Muslims D-Filter paper
- III. Atoms are made up of positively charged particles called
A-Electron B-Protons C-Neutrons D-Nucleus
- IV. The electrons have charge
A- Positive B- Negative C-Neutral D-None of these
- V. Two similar or different atoms combine to form
A- Mixture B-Molecules C- Suspension D-Substance
- VI. There is a fixed ratio of atoms in a
A- Mixture B-Compound C- Suspension D-Element
- VII. A compound and molecule can be represented by
A- Chemical Formula B- Symbol
C-Chemical Equation D-Subscript

SECTION---(B)**Write short answers of the questions given below:****I. Write the name of following elements?**

O	
H	
Na	
Cl	

II. Draw the structure of following molecules.

Water	
Carbon monoxide	
Ozone	

III. What is molecule? Give an example?

IV. What are fundamental particle of an atom?

SECTION---(C)**Q. Answer the question in one word:-**

The symbol of gold is	
Diamond is made up of atoms called	
The father of atomic theory is called	
. Formula of ozone is	

**SECTION .(D)****Q: Fill in the blanks.**

- I. A glucose molecule has formula_____ .
- II. A_____ shows the number and kinds of atoms contained in each molecule.
- III. _____ are used to study atoms and molecules.
- IV. Atoms can be seen with_____
- V. The chemical formula of water is _____ .

GOOD LUCK

BAHRIA COLLEGE E-8 ISLAMABAD

Class VIII

Worksheet

Unit No.2

Choose the correct answer given below:-

I. A chemical reaction occurs when energy is

A- Absorbed B-Given out C. No change D. Both A & B

II. A chemical reaction represented by

A-Symbol B- Formula C-Chemical Equation D- Abbreviation

III. Water can exist in which state of matter

A-Solid B-Liquid C-Gas D- All of these

IV. Gas molecules can move easily from place to place due to

A-Strong force B-Weak force C-Medium force D- Both B & C

V. The solid changes into liquid on heating is called

A- Melting point B-Boiling point C- Freezing point D-Solidification point

VI. Chemical change takes place due to rearrangement of

A- Energy B-Temperature C-Atoms D- Both A & B

VII. The number of atoms before and after the reaction remains

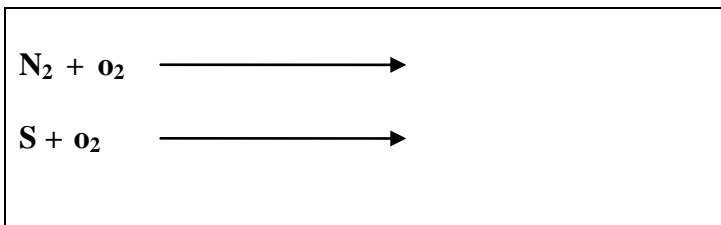
B- Same B- Increase

C- Decrease D- Both B & C




SECTION---(B)

Write short answers of the questions given below:

I. Complete these reactions



I. Explain the arrangement of molecules in solid, liquids and gas state?

Solid	
Liquid	
Gas	

II. What is a melting point?

III. What do you know about boiling point? Give an example?

SECTION---(C)

Q. Answer the question in one word:-

Definite shape and volume	
Take the shape of container	
Solid changes directly into gas	
Gas changes into liquid	



SECTION .(D)

Q: Fill in the blanks .

- I. Energy is _____ when molecules break in to atoms.
- II. Atoms recombine to form new molecules energy is _____.
- III. Particles _____ at their fixed position in solids.
- IV. When a solid is heated _____ energy is increases.
- V. The particles are free to move anywhere in _____.

GOOD LUCK

BAHRIA COLLEGE E-8 ISLAMABAD

Class VIII

Worksheet

Unit No.5

Choose the correct answer given below:-

- I. The system of crystal on the basis of geometrical arrangement of atoms are
A- 4 B-5 C. 6 D.7
- II. Sodium chloride crystal is
A-Cubic shape B- Triclinic shape C-Rhombic shape D-Triangle shape
- III. A solution which contains maximum amount of solute at particular temperature is called
A-Saturated B-Un-Saturated solution C-Super Saturated D-None of these
- IV. A small piece of crystal is lowered into a Standard Solution is called
A- Seed crystal B Basic crystal C-Original crystal D-Both A & B
- V. Silicon Wafers are used to make
A- Solar cell B-Computer microchips C- Both A & B D-Pencils

SECTION---(B)

Write short answers of the questions given below:

- I. What are the conditions in which crystals are formed?

II. Write down two useful applications of crystals?

III. What is the role of seed crystal?

IV. Draw the shape of these crystals

Cubic	
Triclinic	
Tetragonal	
Hexagonal	
Trigonal	
Rhombic	
Monoclinic	

SECTION---(C)

Q. Answer the question in one word:-

<u>Stone</u>	<u>Uses</u>
Diamond	
Silicon	
Quartz	
Sapphire	



SECTION .(D)

Q: Fill in the blanks.

- I. Scientists use _____ to find out structure of crystals .
- II. _____ are solids with fixed, regular.
- III. _____ are formed by rapid cooling of molten lava .
- IV. Crystals have different shapes because _____ arranged differently.
- V. A hot Standard Solution Cools, it will exceed its _____ at a lower temperature.

GOOD LUCK

BAHRIA COLLEGE E-8 ISLAMABAD

Class VIII

Worksheet

Unit No.10

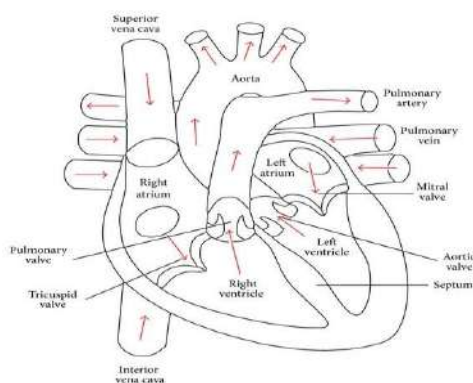
Choose the correct answer given below:-

- I. Green plants need water and carbon dioxide for
A- Photosynthesis B-Respiration C. Combustion D. Both A & B
- II. In unicellular Amoeba gases and food transport from surroundings through
A-Osmosis B-Diffusion C-Active Transport D-Both A & B
- III. Food in plants transported through vessels called
A-Xylem B-Phloem C-Sieve tubes D-Pericycle cells
- IV. Gaseous exchange in plants takes place through
A- Small pores B- Stomata C-Lenticels D-Both B & C
- V. The transport system in humans is called
A- Respiratory system B-Pulmonary system
C- Blood circulatory system D-lymphatic system

SECTION---(B)

Write short answers of the questions given below:

- I. A vertical section of heart shown below



a. Name the chambers of heart on left side.

b. Name the chambers of heart on right side.

c. What is the function of heart?

II. Write the function of blood cells.

White Blood Cells	
Red Blood Cells	
Platelets	

III. What is the function of three type of Blood vessels?

Arteries	
Veins	
Capillaries	

IV. Why is there a need for transport system in multi cellular organism?

SECTION---(C)

Q. Answer the question in one word:-

I. Right side of contains

II. Left side of contains

III. In plants water evaporation is called

IV. Name the heart valves

**SECTION .(D)**

Q: Fill in the blanks.

I. Pulmonary artery supplies blood to _____ .

II. Renal artery supplies blood to _____.

III. Carotid artery supplies blood to _____.

IV. Hepatic artery supplies blood to _____.




V. Mesenteric arteries supplies blood to _____.

VI. Iliac artery supplies blood to _____.

GOOD LUCK

BAHRIA COLLEGE E-8 ISLAMABAD**Class VIII****Worksheet****Unit No.13****Choose the correct answer given below:-****I. Luminous object are****A- Table****B-Sun****C. Plastic****D. Glass****II. Shadow is formed by objects called****A-Opaque****B-Transparent****C-Translucent****D-Both B & C****III. The dark region in shadow is called****A-Umbra****B-Penumbra****C-Circle****D-Half circle****IV. The speed of light in a vacuum is****A- $3 \times 10^7 \text{ms}^{-1}$** **B- $3 \times 10^6 \text{ms}^{-1}$** **C- $3 \times 10^5 \text{ms}^{-1}$** **D- $3 \times 10^8 \text{ms}^{-1}$** **V. Object which allow light to pass through them are****A-Opaque****B- Translucent****C- Transparent****D-Both A &B****SECTION---(B)****Write the short answers of the questions given below:****I. Draw a label diagram of lunar eclipse****II. Draw a label diagram of solar eclipse**

III. Identify the given object as Transparent, Translucent and Opaque:

Chair, Table		
Glass, Water		
Frosted Glass, Butter - Paper		

IV. Write any three characteristics of an image formed by pin hole camera.

V. What type of shadows do the following produce?

<u>A point source of light</u>	<u>An extended source of light</u>

SECTION---(C)

Q. Answer the question in one word:-

I. How shadow is formed?

II. What will be the distance and time to travel light to reach on earth?

III. A beam of light is made up of

IV. During thunderstorm we see the flash of lightening before we hear the clap of thunder why is that so?



SECTION .(D)

Q: Fill in the blanks.

I. A solar eclipse occurs when sun cast shadow of moon on _____ .

II. A pin hole camera work on principle that light travels in_____.

III. A _____ is a partially dark shadow.

IV. The image formed by _____ camera is real & inverted.

V. A_____ occurs when the sun casts a shadow of the earth on the moon.

Checked by_____

GOOD LUCK

Bahria College Islamabad

Work Sheets

Mathematics

Class 8th

Mrs. Zubaida Asif

Chapter # 6 (Algebraic Fractions and Formulae)

Choose the appropriate answer.

1. Solve $\frac{x^2+x-6}{x^2-9x+14}$

a) $\frac{(x+2)(x-3)}{x-7}$

b) $\frac{x+7}{x-3}$

c) $\frac{x-3}{x+7}$

d) $\frac{x+3}{x-7}$

2. Solving the following expression $\frac{3}{(2-\frac{a}{6})}$

a) $\frac{18}{(12-a)}$

b) $\frac{12a}{18}$

c) $\frac{6a}{4}$

d) none of above

3. Simplifying the given expression $\frac{7}{(2x-5)} + \frac{4}{(x-3)}$ gives us

a) $23x - 31$

b) $\frac{(15x-41)}{(2x-5)(x-3)}$

c) $\frac{(x-3)(2x-5)}{23x}$

d) none of above

4. Simplify $\frac{25x^3y}{49xz} \div \frac{15xy^2}{21x^3z^2}$

a) $\frac{5x^4z}{7y}$

b) $\frac{5x^3z}{49y^2}$

c) $\frac{21xz^2}{15y}$

d) $\frac{xz^2}{y}$

5. Solving the expression $\frac{(2a+3c)}{3b+\frac{(a-c)}{b}}$ gives us

a) $\frac{4a}{3b}$

b) $\frac{5a}{3b}$

c) $\frac{3a}{2b}$

d) $\frac{3b}{5a}$

6. Making a the subject of $\frac{a}{b} - \frac{a}{c} = 1$ we get

a) $a = \frac{b}{c}$

b) $a = \frac{c}{b}$

c) $a = c + b + 1$

d) $a = \frac{bc}{(c-b)}$

7. Simplifying the expression $\frac{(m^2cx + mc)}{(m^2x^2 + 2mx + 1)}$ gives us

a) $\frac{mc}{(mx+1)}$

b) $\frac{(mx+1)}{mc}$

c) $\frac{mc+1}{m}$

d) none of above

8. A number is subtracted from 52 and result is divided by 6, the answer is twice the original number, the number is

a) 2

b) 4

c) 6

d) 8

9. Find x if $\frac{3x}{8} - \frac{x}{4} = \frac{1}{2}$

a) 8

b) 16

c) 4

d) 6

10. If we make a the subject of $\sqrt{(3a - 2)} = \sqrt{\frac{a}{b}}$

- a) $a = 2b$
- b) $a = 3b + 1$
- c) $a = \frac{2b}{(3b-1)}$
- d) $a = 5b - 1$

11. Making p, the subject of formula $3b = 2p - 7$, we get

- a) $p = \frac{(3b+7)}{2}$
- b) $p = \frac{2}{3b}$
- c) $p = 2b + \frac{7}{3}$
- d) none of above

12. If we solve the following expression $\frac{(d+3)}{3} - \frac{(2d-3)}{2} = d - \frac{5}{6}$

- a) $d = 15$
- b) $d = 6$
- c) $d = 2$
- d) $d = 1$

13. Simplification of given expression $\frac{16a^2b^2}{48a^3b}$

- a) $\frac{b}{3a}$
- b) $\frac{3a}{b}$
- c) $24a$
- d) $\frac{6a}{7b}$

14. Solving $e + \frac{e}{2} + \frac{e}{3} = 11$ gives the result

- a) $e = 12$
- b) $e = 13$
- c) $e = 11$
- d) $e = 10$

15. A number when added to 5 gives same result as when $\frac{2}{3}$ of it is subtracted from 6, number is

- a) $\frac{5}{3}$
- b) $\frac{4}{5}$

c) $\frac{3}{5}$

d) $\frac{2}{5}$

16. Solving the expression $\frac{(2a+3c)}{3b} + \frac{(a-c)}{b}$ gives us

a) $\frac{4a}{3b}$

b) $\frac{5a}{3b}$

c) $\frac{3a}{2b}$

d) $\frac{3b}{5a}$

17. If we simplify $\frac{m^2}{(m^2-mp)}$ we get

a) $\frac{m}{(m-p)}$

b) $\frac{p}{m}$

c) $\frac{m-1}{p}$

d) $\frac{p}{(m-1)}$

18. A number is added to 4, the result is equal to subtracting 10 from 3times of that number. The number is

a) 5

b) 7

c) 9

d) 11

19. Find x if $\frac{3x}{8} - \frac{x}{4} = \frac{1}{2}$

a) 8

b) 16

c) 4

d) 9

20. If a=20, b=35 and c= 5 then $\frac{(4a+b)}{c}$ is

a) 23

b) 115

c) 53

d) 43

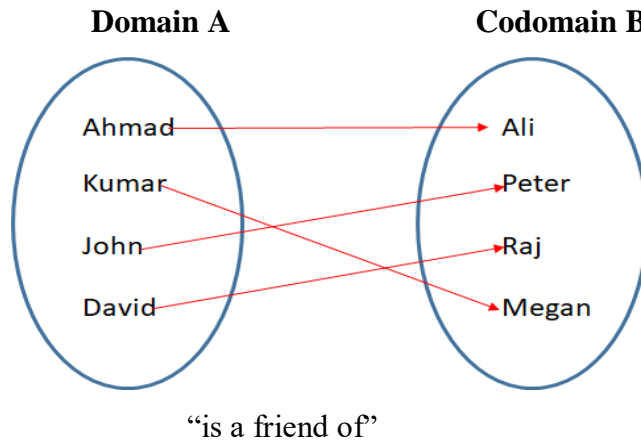
Chapter # 07 (Relations and Functions)

Function:

A function is a relation in which every element in the domain has a unique image in the codomain.

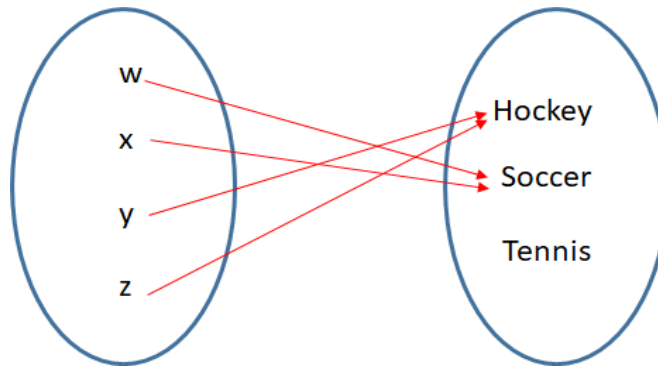
Note:

- A function is also called a mapping.
- The arrow is always from domain to codomain.



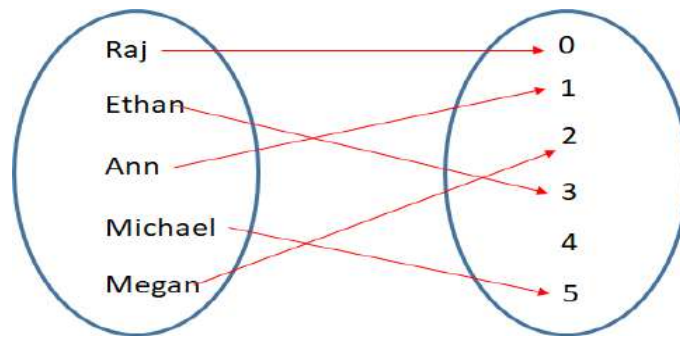
1. State with reason, whether each of the following arrow diagram defines a function.

a)



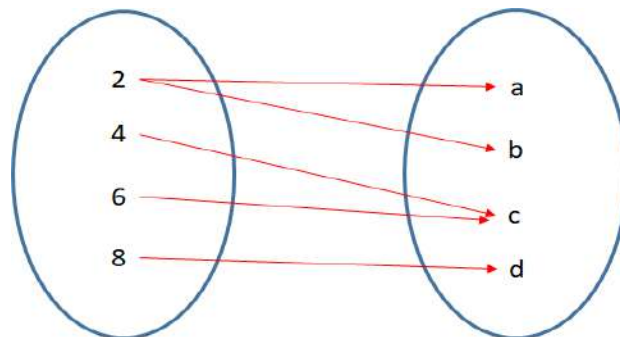
Answer:

b)



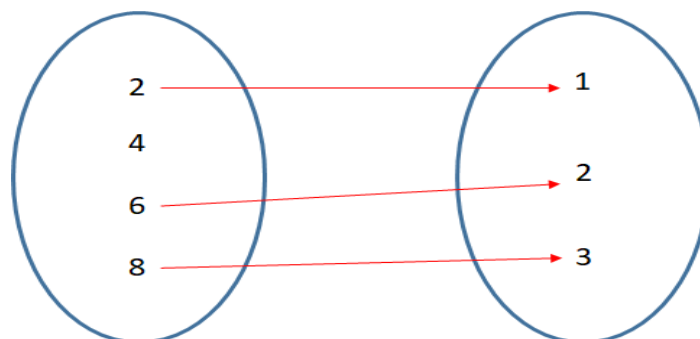
Answer:

c)



Answer:

d)



Answer:

Function Notation

Example:

$$\text{f}(\text{x}) = 3\text{x} + 1$$

name of function
(f of x)
 Input
(domain)
 output
(range)

$$\text{f}(2) = 3(2) + 1 = 7$$

$$\text{f}(-4) = 3(-4) + 1 = 11$$

2. Given the function $\text{f}(\text{x}) = 3\text{x} + 2$ then $\text{f}(2)$ is

- a) 6
- b) 7
- c) 8
- d) 9

3. Given the function $\text{g}(\text{x}) = 5\text{x} - 4$ then $\text{g}(\frac{3}{5})$ is

- a) 0
- b) -1
- c) -2
- d) -3

4. Given the function $\text{f} : \text{x} \rightarrow 10\text{x} + 4$ and $\text{g} : \text{x} \rightarrow 4\text{x} - 6$, then complete the following table.

$\text{f} : \text{x} \rightarrow 10\text{x} + 4$	$\text{g} : \text{x} \rightarrow 4\text{x} - 6$
i. $\text{f}(4)$	i. $\text{g}(\frac{7}{8})$

ii. $f(-\frac{2}{3})$	iii. $g(-1)$
iii. $f(-7)$	iii. $g(3)$

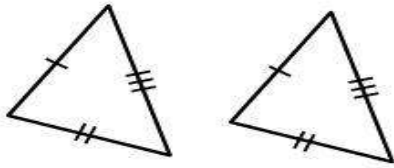
Chapter # 08 (Congruence and Similarity)

Choose the appropriate answer.

1. Objects having same shapes but not necessarily same sizes are
 - a) Similar
 - b) Non-identical
 - c) Non-similar
 - d) None of above
2. Congruent objects are
 - a) Identical
 - b) Non-identical
 - c) Irregular
 - d) None of above
3. Two hexagons of same shape and different sizes are
 - a) Congruent
 - b) Non-identical
 - c) Non-congruent
 - d) None of above
4. Two polygons are similar then their corresponding angles are
 - a) Not equal
 - b) Equal
 - c) congruent
 - d) None of above
5. Two objects of same shape are said to be
 - a) Identical
 - b) Congruent
 - c) Isosceles
 - d) Equatorial
6. Two quadrilaterals of same area but different shapes are
 - a) Non-congruent
 - b) Congruent
 - c) Identical

d) Non-identical

7. If the pictured triangles are congruent, what reason can be given



a) SSS postulate

b) ASA postulate

c) The triangles are not necessarily congruent

d) SAS postulate

8. To be congruent means to be which of the following?

a) To have two identical measurement

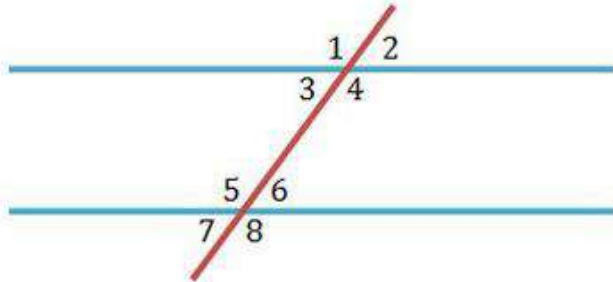
b) To be different

c) To have no identical measurement

d) To be the same

e) To have one identical measurement

9. Name a pair of corresponding angles.



a) Angle 1 and 5

b) Angle 7 and 8

c) Angle 1 and 2

d) Angle 1 and 3

10. If two angles of a triangle are congruent then the sides opposite to them are

- a) Congruent
- b) Equal
- c) Non congruent
- d) Similar

11. Symbol for congruent is

- a) \leftrightarrow
- b) N
- c) =
- d) \cong

12. Symbol for correspondence is

- a) \leftrightarrow
- b) N
- c) =
- d) \cong

13. Symbolically two congruent triangles ABC and PQR are written as:

- a) $\triangle ABC = \triangle PQR$
- b) $\triangle ABC - \triangle PQR$
- c) $\triangle ABC \cong \triangle PQR$
- d) $\triangle ABC \neq \triangle PQR$

14. Corresponding sides of congruent triangle are:

- a) Equal
- b) Different
- c) Perpendicular
- d) Parallel

15. Corresponding angles of congruent triangle are:

- a) Congruent
- b) Non-congruent
- c) Unequal
- d) Supplementary

Chapter # 10 (Pythagoras's Theorem)

Choose the appropriate answer.

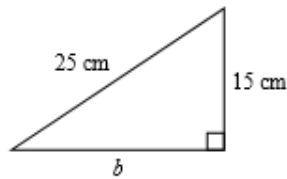
1. Pythagoras's theorem can only be applied in a _____ triangle
 - a) Right angles
 - b) Equilateral
 - c) Isosceles
 - d) Scalene
2. The leg opposite to right angle triangle is called
 - a) The hypotenuse
 - b) The right leg
 - c) Leg A
 - d) The isosceles leg
3. A right angle must have
 - a) A 90 degree angle
 - b) A 45 degree angle
 - c) A 20 degree angle
 - d) A 15 degree angle
4. The lengths of sides of triangle are x cm, (x + 1) cm and (x + 2) cm. the value of x when triangle is right angles is
 - a) 5 cm
 - b) 4 cm
 - c) 3 cm
 - d) 6 cm
5. A triangle whose sides are 15 cm, 36 cm and 39 cm is
 - a) Right angled
 - b) Equilateral
 - c) Isosceles
 - d) None of above
6. In a triangle with sides a, b and c if $a^2 = b^2 + c^2$, then angle facing a is
 - a) Acute angle
 - b) Right angle

- c) Obtuse angle
- d) None of above

7. Each side of square field ABCD is 50 m long, the length of diagonal field is

- a) 70.7 m
- b) 50.5 m
- c) 23 m
- d) 45 m

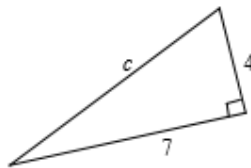
8. Find the length of the unknown side. Round your answer o nearest tenth.



- a) 20 cm
 - b) 400 cm
 - c) 10 cm
 - d) 29.2 cm
9. The length of two sides of a right triangle are leg: 12 m and hypotenuse: 15 m. Find the length of the third side.

- a) 1 m
- b) 6 m
- c) 9 m
- d) 17 m

10. Find the length of the hypotenuse. Round your answer to the nearest hundredth.

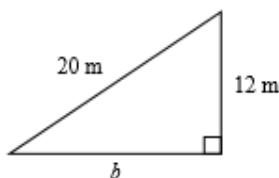


- a) 11
- b) 9.95
- c) 8.06
- d) 3.32

11. The length of two sides of a right triangle are leg: 9 m and hypotenuse: 16 m. Find the length of the third side. Round to the nearest tenth if necessary.

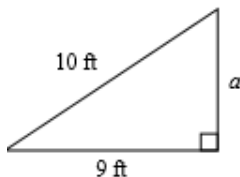
- a) 28.8 m
- b) 13.2 m
- c) 104 m
- d) 14.4 m

12. Find the length of the unknown side. Round your answer to the nearest tenth.



- a) 23.3 m
- b) 16 m
- c) 256 m
- d) 8 m

13. Find the length of the unknown side. Round your answer to the nearest tenth.



- a) 13.5 ft
- b) 1 ft
- c) 4.4 ft
- d) 19 ft

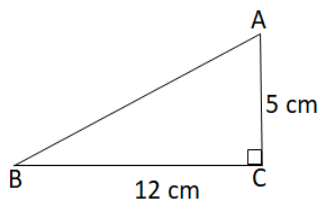
14. A rectangular park has been constructed in downtown Lilburn. The designer wants to put a gravel walkway that cuts diagonally through the park. The width is 8 ft and the height is 6 ft long. What is the length of his walkway?

- a) 23 feet
- b) 13 feet
- c) 10 feet
- d) 7 feet

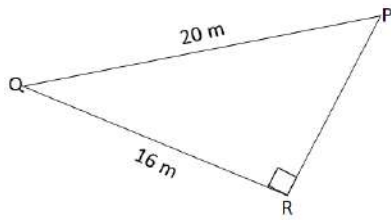
15. A large pine tree was struck by lightning and fell as shown by the diagram below. Which equation could be used to find the length of the fallen part of the tree?



- a) $8^2 + 13^2 = x$
 - b) $\sqrt{8^2 + 13^2} = x$
 - c) $13^2 - 8^2 = x$
 - d) $\sqrt{13^2 - 8^2} = x$
16. The diagonal of a rectangular field is $(x + 9)$ m and the sides are $(x + 7)$ m and x . Find the value of x .
- a) 10
 - b) 12
 - c) 8
 - d) 6
17. The bottom of a ladder must be placed 4 feet from a wall. The ladder is 12 feet long. How far above the ground does the ladder touch the wall? Round your number to the nearest tenth.
- a) 10.6 feet
 - b) 11.9 feet
 - c) 11.3 feet
 - d) 128 feet
18. In $\triangle ABC$, $AC = 5$ cm, $BC = 12$ cm and $\angle C = 90^\circ$. Calculate the length of AB .



19. In $\triangle PQR$, $PQ = 20$ m, $QR = 16$ m and $\angle R = 90^\circ$. Calculate the length of PR .

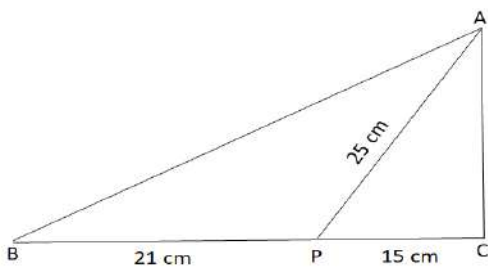


20. In $\triangle ABC$, $\angle C = 90^\circ$, P lies on BC such that $BP = 21$ cm, $PC = 15$ cm and $AP = 25$ cm.

Calculate the length of

i. AC

ii. AB



مخون اللہ
نظم - حمد - شاعر - اسماعیل میرٹھی
جماعت ہفتم

- دیکھئے اشارات میں سے درست جواب کا انتخاب کریں۔
- ۱۔ حمد میں _____ کی تعریف کی جاتی ہے۔
اللہ تعالیٰ - نبی کریم ﷺ - صحابہ کرام رضی اللہ عنہم - ولی اللہ
- ۲۔ بارش کا دوسرا نام _____ بھی ہے۔
مینہ - بادل - انعام - مگرگھٹ
- ۳۔ اللہ تعالیٰ کے ذکر سے بیمار دل _____ رہتا ہے۔
پر سکون - قوی - شادمان - پر ہول
- ۴۔ حمد میں شاعر نے تارے کو _____ سے تشبیہ دی ہے۔
الغارے - شرارے - شام کا متفاد لفظ ہے۔
- ۵۔ رات - سویرا - اندھیرا - دن
- ۶۔ سویرا اور اندھیرا _____ الفاظ ہیں۔
مقابلہ - ہم ردیف - مترادف - متضاد
- ۷۔ دور رہ جائے مجھ سے _____۔
دوست - گھر - سکول - خدا
- ۸۔ کھنڈر، مگرگھٹ، قبرستان _____ کی علامت کے طور پر پیش کیے گئے ہیں۔
تنبیہ - موت - ویرانی - پریشانی
- ۹۔ _____ کرنے میں لوگ بے حارے۔
رہم - خطا - توسل - خوف
- ۱۰۔ قواعد کی رو سے لفظ "آندھی" کلاس ہے؟
مذکر - مؤنث - فاعل - مفعول
- ۱۱۔ جاننی کا متفاد لفظ _____ ہے؟
گھب، اندھیرا - سویرا - شرارہ - پر ہول
- ۱۲۔ رات کو طوفان آنے پر ہر طرف _____ چھا گیا۔
اندھیرا - سناٹا - خوف - ویہم
- ۱۳۔ کیونکہ _____ ہے میرے ساتھ۔
ہذا - دوست - سامان - گھر
- ۱۴۔ _____ کو گرتے ہیں جسے الغارے۔
دن - شب - شام - سویرے
- ۱۵۔ حمد میں _____ کا تصور بیان کیا گیا ہے۔
رسالت - توحید - وحدت - حکمرانی

جماعت ہشتم
شاعر سافر مدنی

مفرد الود
نظم نعت

- دیکھئے کئے اشارات کی مدد سے درست جواب کا انتخاب کریں

۱۔ نعت میں _____ کی تعریف بیان کی جاتی ہے۔
اللہ تعالیٰ _____ محاسب کرام _____ آپ _____ ہے۔

۲۔ نعت میں محفل کا مترادف لفظ _____ ہے۔
کوشن _____ بزم _____ پیغام _____

۳۔ آپ _____ ہوئے انسانوں کو سیدھا راستہ دکھانے آئے۔
_____ ناکشہ _____ معشکہ _____ نادان _____

۴۔ ایک مرکز سے مراد ہے۔ _____

۵۔ ایک _____ جو یرول میں اُجالا کر دے۔
اسلام _____ جھنڈا _____ مکہ مکرمہ _____

۶۔ منزل "قوام کی رو سے" _____ ہے۔
آواز _____ شمع _____ پیغام _____

۷۔ واحد _____ مذکر _____ مؤنث _____
بن کے اُمند ہے، ہوئے طوفانوں میں _____

نا خدا _____ انسان _____ خدا _____

۸۔ نعت میں دولوں _____ کہیئے لفظ بزم کوشن بنایا گیا ہے۔
اسٹاروں _____ جہانوں _____ ستاروں _____

۹۔ آپؐ ہمارے _____ نبیؐ میں۔
_____ آخری _____ دوسرے _____

۱۰۔ نبیؐ _____ تک راستہ دکھانے کیئے آئے۔
_____ دور _____ آخر _____ ہمیشہ _____

۱۱۔ توحید کا مفہاد ہے۔ _____
واحد _____ شرک _____ عبادت _____

۱۲۔ ایک پیغام سے شاہ کی مراد ہے۔ _____
عزائی تعلیمات _____ عرب ایک بات _____ اشارہ _____

مفتون اکره جماعت مشتم

در دِل کے واسطے پیدا کیا انسان کو

- دیکھئے اشارات کی مدد سے درست جواب کا انتخاب کریں۔

۱۔ سیم ————— چہی۔

انسان . اشرف المخلوقات . رحمہ

یہ بلند مرتبہ ہے۔

۲. دوسرے کے دکھ کو محسوس کرنا انسان کو

سب . مخلوقات . فرشتوں

۳۰ - موبیہ مشورہ ہیں۔ کما دور ہے۔

عنوش عالی . البکر م . فحش مسلی

ما چند روزی است

۱۴۔ اللہ تعالیٰ نے انسان کی فطرت میں

محبت و پیروی : انسانیت : بھلائی

۵۔ اللہ اس کے بدلے میں ————— دے گا۔

دوس سو

کتابت ہے خدا کا رسولؐ میں

معمولاً - قند لوزی - مسک - مسک - مسک

۱۔ عالم میں صحابہ کھاپٹار احمد قربانی، شمال ہے۔

پیرمستانی

فرغ

2013

۱۔ جو بچے "عزت کی وہر سے سکول میں" د

کا شہری بناسکتے ہیں۔

کارآمد . افحا . بر سکون

۹۔ کفر لغوی معانی گفتو اور بات فہمت کے میں ۔

محاورہ - روزمرہ - ذومعنی

۱۵ - فطکو کیا جاتا ہے

ملفوظات - آدھی منہجیات - پیار محبت

عفرت کر ذوالنورین لہا حائے

علي بن عثمان - عمه رفته

ہمیں دوسروں کی مدد بلانے کے لئے اللہ کی

حاصل کرنی چاہئے

فوشنودنی - صربی - پسندیدگی

Comprehension

Unit 1

1. Give meaning of the words as used in the text.

- i. Rank _____
- ii. Phenomena _____
- iii. Colonization _____
- iv. Exploits _____
- v. Evoke _____
- vi. Coincide _____
- vii. Initiative _____
- viii. Desperate _____
- ix. Heathen _____
- x. Docile _____
- xi. Manifest destiny _____
- xii. Impetus _____

2. Give meaning of the sentences

- i. The urge to find new land beyond Europe led to an unprecedented increase in knowledge about this planet.

- ii. Discovery led to overseas commitments that influenced the rise and fall of nations in Europe.

- iii. Bullion was not just wealth, but the means of obtaining wealth.

- iv. None of the material needs that underlay the pressure for exploration could have been satisfied without seaworthy ships and skillful mariners.

3. Tick the correct answer.

- i. The Renaissance voyages of discovery had _____ had effect on the present day world.

- a. No
- b. Only one
- c. Little
- d. A great

- ii. Exploration became more significant in Europe in the 15th century when

- a. Individual merchants became interested in it
- b. Governments were worried about over population in their countries
- c. Governments actively became involved in it.
- d. More and more European nations became rich.

- iii. Which statement about Renaissance voyages of 14th century discovery is false?

- a. They began in 14th century.
- b. They led to the colonization and settlement of lands outside Europe.
- c. They increased man's knowledge about the world.
- d. They bought new wealth and new products to Europe.

- iv. Which of the following claim is made by the writer?

- a. There were civilizations in the other parts of the world which were superior to western Europe.
- b. Some of the civilizations in other parts of the of the world were equal in some ways to that of western Europe.
- c. Western European civilization was superior in most respects to those in other parts of the world.
- d. Some of the civilizations in other parts of the worlds were equal in all respects to that of western Europe.

- v. The initiative for exploration came from the European nation and not from other nations in the 15th century because
 - i. They were born leaders.
 - ii. They were the richest nations.
 - iii. They possessed the high level of civilization
 - iv. Of the unique combination of needs, skills and imagination.

- vi. One important reason for the European nations' success in exploration in the 15th century is that
 - i. They possessed very great wealth.
 - ii. They had strong motives.
 - iii. They alone possessed both seaworthy ships and skillful mariners.
 - iv. They set out on their voyages in the name of God.

Unit 3

1. Explain the expressions

- i. Questionable validity

- ii. Hand me down memories

- iii. Social dealings

- iv. Host countries

- v. Rooted in envy

- vi. Nationalistic sensitivity

vii. Racial arrogance

viii. Corporate success

ix. Stagnation

2. write the synonyms of the following words

i. Outsider

ii. Depends

iii. Examples

iv. Familiar

v. Strangely

vi. Naturally

vii. Advanced

viii. Vanishes

3. Tick the correct answer

i. The Japanese businessman's poor image abroad is based mainly on

- a. Unpleasant stories involving Japanese soldiers during World War II
- b. Their actual behavior today
- c. Racial prejudice
- d. Their aggressive business tactics

ii. The writer is of the opinion that the reputation the Japanese have earned

- a. Should not be taken seriously
- b. Is completely undeserved
- c. Can never be altered
- d. Is not soundly based

- iii. The Filipino graphic designer's attitude towards Japanese is based on
 - a. What he has heard about Japanese behavior during the war
 - b. An unpleasant war experience involving Japanese soldiers
 - c. A belief in the bad reputation of Japanese businessmen
 - d. His own anti social behavior
- iv. What does the writer say about the Japanese businessman's reputation abroad?
 - a. It has certainly been magnified
 - b. It is without a doubt a very impressive one
 - c. It is certainly a false one
 - d. It is an unfair one
- v. From the Japanese businessman's point of view, his poor image in Asia and elsewhere is the result of
 - a. Nationalistic sensitivities
 - b. Anti-Japanese sentiments
 - c. Racial arrogance
 - d. The jealousy that people have of his economic superiority
- vi. What impresses a Japanese businessman most of all seems to be
 - a. Well managed company
 - b. A successful national economy
 - c. Corporate successes
 - d. Another successful businessman
- vii. How have the Australian lost the respect of the Japanese?
 - a. They are now unable to supply the Japanese with the raw materials they want
 - b. They have projected a false image of their economy and have been found out
 - c. Their country has asked Japan for loans instead of the other way round
 - d. The economy has failed to maintain its active and progressive image

4. Answer the following questions

- i. Explain how World War II has affected the Japanese businessman's image abroad today?

ii. To what does the Japanese businessman attribute his poor image abroad?

iii. What is meant by the “economic superiority” Of the Japanese businessman, and why is it beyond argument?

iv. How does the Japanese businessman view the people of the country he does business with?

v. Explain why the Japanese businessman has lost the respect for Australia today?

Unit 5

1. Make sentences of the following

i. Settlement

ii. Helplessness

iii. Complete

iv. Discipline

v. Sores

vi. Raising

vii. Cheerful

viii. Ceremony

2. Tick the correct answer

i. How did Father Damian gain the respect of the lepers?

- a. He brought the comforts of a religion
- b. He started a clinic to dress their sores

- c. He persuaded them to help themselves
 - d. He showed that he neither feared nor was disgusted by them
- ii. Which of the following statements about father Damian is true?
 - a. He left all the hard work to the lepers
 - b. He worked as hard as the lepers
 - c. He worked harder than any of the lepers
 - d. He did all the work on the colony
- iii. Why did father Damian have a larger and more beautiful chapel built?
 - a. His congregation disliked the smaller and uglier chapel
 - b. His congregation became too late for the little chapel
 - c. His congregation wanted to worship in a larger and a more beautiful chapel
 - d. He wanted to raise the spirits of his congregation
- iv. How did father Damian help the lepers to overcome the fear of dying?
 - a. He told them that he was not afraid of death
 - b. He told them that there was nothing fearful in death
 - c. He told them that death was the beginning of a new and a happy life
 - d. He told them that death meant the end of their problems and sorrows

3. Answer the questions

- i. Why do you think father Damian regarded the little chapel as a sign of hope?

- ii. How did father Damian bring cheer and gaiety to the lives of the lepers?

-
-
- iii. Describe father Damian's character? Which phrases and words would you use?

Unit 7

1. Write the meaning of the sentences

- i. My hospital is open to all suffers

- ii. He would spare them as much pain as he could

- iii. Death, to the African, has always been something as natural as birth

- iv. He could not put from his mind the immense pity and anxiety he felt for each patient

- v. He suffered with them in their pain and weakness

- vi. To him it had been well worth any amount of sacrifice just to see the joy of those who had been cured.

vii. One payment that meant a great deed was labor done for the hospital

2. Give synonym of the word and use both the word and the synonym in sentence

i. Managed

Synonym: _____

Sentence:

Sentence:

ii. Stealthily

Synonym: _____

Sentence:

Sentence:

iii. Saved

Synonym: _____

Sentence:

Sentence:

iv. Tenderness

Synonym: _____

Sentence:

Sentence:

v. Honest

Synonym: _____

Sentence:

Sentence:

vi. Gently

Synonym: _____

Sentence:

Sentence:

vii. Calmly

Synonym: _____

Sentence:

Sentence:

viii. Plagued

Synonym: _____

Sentence:

Sentence:

3. Tick the correct answer

Which of the following statements about Dr. Schweitzer's patients is false?

- i.
 - a. Many of them were extremely when they came to him
 - b. Many of them we witch doctors who came surreptitiously in the night
 - c. Many of them, though extremely ill and weak, came unaided to him
 - d. Many of them had been deserted by their relatives
- ii. In what way were Dr. Schweitzer's African patients different from his other patients?
 - a. They could accept the truth about the seriousness of their disease
 - b. They insisted on being told that their diseases were incurable
 - c. They were resigned to the idea that they would die of their diseases
 - d. They believed that they would die of natural causes
- iii. Which of these statements is true about Dr. Schweitzer?
 - a. He was entirely professional in his attitude towards his patients
 - b. He was wholly committed to the welfare of his patients
 - c. He could feel whatever his patients suffered in the same manner and degree
 - d. He looked down on rewards for his services

4. Answer the questions

- i. Some of Dr. Schweitzer's patients were taken to his hospital "stealthily by night". Why do you think those who took them there did not do so openly?

- ii. Explain how a show of love and tenderness could help make the end a little easier for dying patients?

- iii. "A doctor needs to conserve his emotional strength and energy, so he can give the same attention to all". Did Dr. Schweitzer practice this? Why?

- iv. Name the various ways Dr. Schweitzer's patients or relatives showed their gratitude

Vocabulary & Usage

Unit 1

1. Form verb from the words

Word	Verb
i. Large	<hr/>
ii. Standard	<hr/>
iii. Cheaper	<hr/>
iv. Drainage	<hr/>
v. Strength	<hr/>
vi. Energy	<hr/>
vii. Atom	<hr/>
i. Modern	<hr/>

2. Write a suitable word for each adjective

Adjective	word
i. Distant	<hr/>
ii. Delicious	<hr/>
iii. Exceptional	<hr/>
iv. Snow clad	<hr/>
v. Shiny	<hr/>
vi. Sharp	<hr/>
vii. Muddy	<hr/>

- viii. Small _____
- ix. Solar _____
- x. Expensive _____
- xi. Diligent _____
- xii. Unruly _____
- xiii. Satisfying _____

3. Fill in the blank with correct word

- i. The _____ scientist warned that an earthquake in the region was _____ . (imminent , eminent)
- ii. The writer is very _____ he wrote an interesting story about life on an _____ planet. (imaginary , imaginative)
- iii. Have you been _____ in going _____ this manuscript?
(thorough , through)
- iv. _____ tribes inhabit this island of _____ vegetation.
(various , varied)
- v. He was very _____ in the project; he offered many _____ proposals at the meeting. (interesting , interested)
- vi. This _____ drug has _____ market in the East.
(Potential , Potent)

Unit 3

1. Use the verbs in sentences

- i. Ground

- ii. Fear

- iii. Question

- iv. Sun

- v. Cry

- vi. Calm

2. Form an adjective for the words and give to suitable nouns

	Word	Adjective	Noun 1	Noun 2
i.	Question	_____	_____	_____
ii.	Expression	_____	_____	_____
iii.	Wit	_____	_____	_____
iv.	Love	_____	_____	_____
v.	World	_____	_____	_____
vi.	Region	_____	_____	_____
vii.	Dignity	_____	_____	_____
viii.	Danger	_____	_____	_____

3. Fill in the blank with correct preposition or an adverb

- i. Mrs. Lee flatly refuses to patch _____ quarrel with a colleague.
- ii. Please go _____ the accounts again before you certify them.
- iii. She looks run _____ after her illness.
- iv. I ran _____ an old friend at the supermarket.
- v. Teaching children calls _____ patience.
- vi. Darkness set _____ before we reached the village.
- vii. I picked _____ French while I was studying music in Paris.

Unit 5

1. Write the antonyms and make sentences from the word and the antonym

- i. Tender
Antonym: _____

Sentence: _____

Sentence: _____

ii. Expensive
Antonym: _____

Sentence: _____

Sentence: _____

iii. Wasteful
Antonym: _____

Sentence: _____

—

Sentence: _____

iv. Mild
Antonym: _____

Sentence: _____

Sentence: _____

v. Sophisticated
Antonym: _____

Sentence: _____

Sentence: _____

vi. Concentrated
Antonym: _____

Sentence: _____

Sentence: _____

vii. Maturity
Antonym: _____

Sentence: _____

Sentence: _____

viii. Rough
Antonym: _____

Sentence: _____

Sentence: _____

ix. Proper
Antonym: _____

Sentence: _____

Sentence: _____

x. Delicious
Antonym: _____

Sentence: _____

Sentence: _____

xi. Loose
Antonym: _____

Sentence: _____

Sentence: _____

xii. Identical
Antonym: _____

Sentence: _____

Sentence: _____

2. Use the verbs in sentences

i. Tender _____

ii. Water _____

iii. Appeal _____

iv. Average _____

v. Flavor _____

vi. Season _____

vii. Sour _____

viii. Rule _____

ix. Condition _____

- x. Smooth _____

- xi. Contact _____

3. Use the correct word from the bracket.

- i. The _____ of Capri is a popular tourist resort. (aisle , isle)
- ii. Did he _____ the money in gambling. (lose , loose)
- iii. In the revised _____ of the book, all measurements were metricized.
(addition , edition)
- iv. The driver slammed on the _____ when the traffic light turned red.
(break , brake)
- v. She gave _____ to students with family problem. (counsel , council)
- vi. _____ the cheese into the beaten eggs and fry the mixture over slow fire.
(great , grate)
- vii. The scaffolding at the construction _____ collapsed but no one was hurt.
(sight , site)
- viii. After the children's party, her voice was _____ from shouting.
(hoarse , horse)

Unit 7

1. Provide adverbs to the words and use the adverb in sentence

- i. Tenderness
Adverb: _____
Sentence: _____

- ii. Easy
Adverb: _____
Sentence: _____

- iii. Spare
Adverb: _____
Sentence: _____

- iv. Pain
Adverb: _____
Sentence: _____

- v. Honest
Adverb: _____
Sentence: _____

- vi. False
Adverb: _____
Sentence: _____

- vii. Natural
Adverb: _____
Sentence: _____

- viii. Emotional
Adverb: _____
Sentence: _____

- ix. Energy
Adverb: _____
Sentence: _____

- x. Anxiety
Adverb: _____
Sentence: _____

- xi. Gratitude
Adverb: _____
Sentence: _____

xii. Consciousness
Adverb: _____
Sentence: _____

2. Form compound words

	Word	Compound word
i.	Witch	_____
ii.	Way	_____
iii.	Night	_____
iv.	Pain	_____
v.	Mind	_____
vi.	Joy	_____
vii.	Mud	_____
viii.	Roof	_____

3. Fill in the blanks with correct preposition or adverb

- i. I can't make _____ what he has written.
a. Up
b. Out
c. Into
d. After
e. For
- ii. Have you made _____ your mind about acting in the play.
a. Out
b. After
c. Over
d. Up
e. On
- iii. John carried _____ his father's retail business when the old man became ill.
a. Out
b. For
c. On
d. Over
e. From
- iv. Have you carried _____ Mr. Lewis' order?
a. In
b. On
c. Over
d. Out
e. Back

- v. I look _____ him as a teacher and as a friend.
a. For
b. Up
c. In
d. Above
e. On
- vi. I am looking forward _____ spending my holidays with my grandparents.
a. To
b. From
c. Of
d. Over
e. Upon
- vii. The young man spent his money foolishly and soon got _____ debt.
a. In
b. Into
c. On
d. Off
e. To
- viii. Her nagging got _____ his nerves and left the room.
a. Away
b. Off
c. On
d. Out
e. In
- ix. You can always count on me, I will not let you _____.
a. Up
b. Alone
c. Down
d. Out
e. In
- x. He ran up _____ a lot of opposition when he recommended a reorganization of staff.
a. Into
b. Through
c. At
d. Against
e. Over
- xi. When she came _____ she asked to see her son.
a. Off
b. To
c. Forward
d. At
e. On

Unit 1

1. Pick out the finite and non finite verbs from the sentences below

- i. After loitering for ten minutes, the boy walked away.

- ii. Having settled himself into the armchair, he picked up the newspaper to read.

- iii. It is wonderful to have an opportunity to visit Disneyland.

- iv. The house was repainted before it was sold.

- v. George, eliminated from the team, has refused to talk to anyone.

- vi. Since winning the prize, he has been boasting about it to everyone.

2. Fill in the blanks with Present Participle or Past Participle.

- i. They are _____ to the party tonight.

- ii. Several bills have been _____ in parliament.

- iii. The lunch is _____ for next Saturday.

- iv. They have _____ the bills.

- v. The children are _____ a lot of noise.

- vi. The boxes are _____ of wood

- vii. She has _____ to Europe twice.

3. Fill in the blanks with correct form of verbs. The verbs may be finite or non finite.

- i. After _____ for an hour, he _____ in exasperation.

- ii. It _____ obvious that she _____ you.

- iii. Dog is _____ men's lives.

- iv. The man _____ at the bus stop is like my uncle.

- v. The storybook which my teacher _____ very interesting.
The travelers _____ the beautiful scenery as they
_____ their way through the country.
- vi. Crowds _____ the street _____ the procession.

Unit 2.

1. State whether the underlined word is a gerund or a present participle.

- i. Announcing the happy news, he announced the sensation in the office.

- ii. The government is in the process of announcing new administrative measures.

- iii. They watched the ship disappearing over the horizon.

- iv. Climbing that hill is beyond me.

- v. She pointed to an object bobbing in the water.

- vi. Stop behaving like a child.

2. Put a pro noun before the gerund into possessive case.

- i. We object to _____ smoking in the lift.
- ii. He is tired of _____ nagging.
- iii. We are keen on _____ coaching us every week.
- iv. Have you heard of _____ winning the first prize?
- v. I appreciate _____ informing me about it.
- vi. She complained of _____ talking so loudly.
- vii. The principal _____ helping those in need.
- viii. I am disgusted at _____ speaking so disrespectfully of our president.
- ix. My neighbors are disturbed by _____ playing the trumpet.
- x. The hostess does not mind _____ coming late.

3. Complete the sentences by forming gerund(s) from the verbs given in the bracket.

- i. My uncle is fond of _____ and _____. (swim , dance)
- ii. He is to stand trial for _____ his employer. (cheat)
- iii. _____ at home is cheaper than _____ out. (eat , dine)
- iv. He insists on _____ her the story again. (tell)
- v. I thanked my aunt for _____ me a watch. (send)
- vi. He doesn't like _____ away from home too long. (be)

4. Complete the sentences by forming present participle or past participle from the verbs in the bracket.

- i. He called in a plumber to repair the _____ pipe. (leak)
- ii. The _____ aero plane was discovered in thick jungle. (wreck)
- iii. The _____ dog disturbed the whole neighborhood. (bark)
- iv. The _____ novel kept him occupied for hours. (absorb)
- v. Her _____ visit caused her host much inconvenience. (extend)
- vi. The steam from the _____ water makes the kettle whistle. (boil)

Unit 3

1. Pick out the infinitives/ infinitive phrases from the sentence below and state their functioning as a noun, adjective, or adverb.

- i. I hope to win the prize in the draw.

- ii. We assure this is the best thing to do.

- iii. To be kind to others is a virtue.

- iv. The team practiced hard to win the match.

- v. He had no wish to take revenge.

- vi. His aim is to create trouble and bring down the government.

vii. He sounded fire alarm to warn everyone to evacuate the building.

viii. This is the best time to visit Japan.

2. Rephrase each sentence using pronoun (it) as the subject.

i. To climb a mountain, it takes a lot of endurance.

ii. To speak reasonably to him is futile.

iii. To teach retarded children requires patience and dedication.

iv. To criticize others is easy.

v. To tamper with electrical appliances is dangerous.

vi. To see the children do well gives the man satisfaction.

Composition Writing

1. Narrative

- i. Write a composition on The worst day of my life.
- ii. Write a composition on My favorite family vacation.
- iii. Write a composition on My first time alone.

2. Descriptive

- i. Write a composition on The best restaurant in town.
- ii. Write a composition on A life changing event
- iii. Write a composition on The most embarrassing moment of your life.

Application writing

- i. Write an application to the principal of your school requesting him to allow you to avail college hostel facility.
- ii. Write an application to the principal of your school requesting him to set up a new canteen for the school students.
- iii. Write an application to the principal of your school requesting him to take your class on a trip.
- iv. Write an application to the principal of your school requesting him to open a painting and calligraphy club for school students.

Note:

1. Attempt the composition and application on the area provided to you starting from page 28 of worksheet.
2. Exercises from comprehension unit 2,4, & 6 start from page 51 of worksheet.

This image shows a full page of a blank sheet of white paper with horizontal ruling lines. The lines are evenly spaced and run across the width of the page, providing a guide for writing. There are no margins, text, or other markings on the paper.

[illegible]

This image shows a single sheet of white paper with horizontal ruling lines. The lines are evenly spaced and run across the width of the page. There are no margins, text, or other markings on the paper.

[illegible]

[illegible]

[illegible]

[illegible]

[illegible]

[illegible]

[illegible]

[illegible]

[illegible]

This image shows a full page of blank, lined paper. It features approximately 28 horizontal black lines spaced evenly across the page, typical of notebook or composition paper. The lines are thin and extend from the left edge to the right edge. There are no margins, text, or other markings on the page.

[illegible]

[illegible]

[illegible]

[illegible]

[illegible]

This image shows a full page of blank, lined paper. It features approximately 28 horizontal black lines spaced evenly across the page, typical of standard notebook paper. The lines are thin and extend from the left edge to the right edge. There are no margins, text, or other markings on the page.

This image shows a single sheet of white paper with horizontal ruling lines. The lines are evenly spaced and run across the width of the page. There are no margins, text, or other markings on the paper.

This image shows a single sheet of white paper with horizontal ruling lines. The lines are evenly spaced and run across the width of the page. There are no margins, text, or other markings on the paper.

This image shows a single sheet of white paper with horizontal ruling lines. The lines are evenly spaced and run across the width of the page. There are no margins, text, or other markings on the paper.

This image shows a single sheet of white paper with horizontal ruling lines. The lines are evenly spaced and run across the width of the page. There are no margins, text, or other markings on the paper.

1. Write the meaning of the words below

	Words	Meaning
i.	Stylized	_____
ii.	Rigid	_____
iii.	Approximate	_____
iv.	Conventional	_____
v.	Sacred	_____
vi.	Preliminary	_____
vii.	Bob	_____
viii.	Battered	_____
ix.	Split second	_____
x.	Subtle	_____
xi.	Gear	_____
xii.	Humiliation	_____

2. Tick the best explanation of the following phrases:

- i. Not too far off from _____
 - a. Not a great distance from.
 - b. Not very different from.
 - c. Corresponding to or exactly alike.

- ii. Betting is fast and heavy _____
 - a. Bets are made quickly and in great numbers.
 - b. Bets are placed rapidly after deliberation.
 - c. A great deal of money is made and lost.

- iii. Soften the brutality of the battle _____
 - a. Muffle the other sounds made during the fight.
 - b. Reduce the ferocity or wilderness of fighting.
 - c. Make the fight less savage or cruel.

- iv. Rough and tumble affair _____
 - a. Sights consisting of somersaults and other acrobatic feats.
 - b. Disorderly and violent struggle.
 - c. Dangerous but entertaining events.
- v. Achieve a knock out _____
 - a. Succeed in throwing the opponent out of the ring.
 - b. Succeed in landing a blow on the opponent's head.
 - c. Succeed in stunning the opponent and making him temporarily incapable of fighting.

3. Tick the correct answer.

- i. Which statement is false about Thai boxing?
 - a. Thai boxers fight to the accompaniment of music.
 - b. They begin fight when music starts.
 - c. The music has no effect on the boxers, only on the spectators.
 - d. The music adds excitement to the fight and masks its brutality.
- ii. In Thai boxing, the interval between rounds is longer because the fighters need _____
 - a. To recover their energy.
 - b. To have their injured treated.
 - c. To consult their instructors on tactics.
 - d. To pray for courage to continue.
- iii. What do the Thai boxers do immediately before they begin a bout?
 - a. They kneel on the canvas in the direction of their birth.
 - b. They bow repeatedly and say their prayer.
 - c. They pay homage to their instructors.
 - d. They show off their skill and style.
- iv. Some foreign spectators are amazed at the ferocity in the ring because _____
 - a. They are not used to seeing it there.
 - b. They feel it should not happen there.
 - c. It shows a side of Thai people that they dislike.
 - d. It contradicts their idea of what the Thais are like.

4. Answer the questions

- i. The word **regulation** means **according to the rules**. Which set of rules does it refer to for Thai Boxing and conventional boxing? How do you know?

ii. How do you think music serves **to soften the brutality of the battle?**

iii. What about Thai Boxing bouts, do you think it give the spectators the impression that **they are rough and tumble affairs?** If you were a fan how would you disapprove that?

Unit 4

1. Explain the following expressions

- i. The incredulous

- ii. Conviction

- iii. Determine

- iv. Division of labor

- v. Absorbed

- vi. Defended its secrets

- vii. In fusion

- viii. Haphazard equipment _____

- ix. Interminable struggle _____

- x. Insurmountable _____

- xi. Paltry _____

- xii. Exasperated _____

- xiii. Scorned _____

- xiv. So much the worse! _____

2. Give meaning of the following.

- i. Marie was sort of a factory all by herself.

- ii. Pierre Curie was more attached to the meaning of natural Phenomena than to their material reality.

- iii. With stubborn eyes under her great brow, she clung to her apparatus and her test tubes.

iv. Radium officially existed.

3. Answer the questions

i. For what reason did Pierre and Marie Curie labor for four years in a shed?

ii. When did Pierre and Marie Curie decide to **separate their efforts** in their study of radium and of radio activity? Describe how this division of labor was carried out?

iii. What obstacles did Pierre and Marie Curie face in their work? How was each affected by these obstacles?

Unit 6

1. Write the meanings of the following

i. In the age of medical specialties

ii. Bring swift relief

iii. Can suspend life

iv. Its explosive nature

v. The finishing touch

vi. Tailored to the individual

vii. Become the watch dog

viii. Subtle changes

ix. Ailments

x. Agony

xi. Induce

xii. Nauseating

xiii. Intravenous

xiv. Asphyxiation

2. Tick the correct answer.

1. The use of anesthesia has existed for

- a. A hundred years.
- b. More than a century.
- c. Less than a century.
- d. Only since the beginning of this century.

2. An anesthesiologist's main concern is to

- a. Relieve the pain of accident victim.
- b. Treat patients suffering from incurable disease.
- c. Ease the pain of surgery.
- d. Administer pain relieving drugs.

3. What makes it possible for the surgeon to perform the amazing feats of modern surgery?

- a. It is the use of machines which are substitute for body organs.
- b. It is drugs which block the pain and tranquilizers which banish fear.
- c. It is the gases which induce a dreamy sleep or deep unconsciousness.

- d. It is the precise control exercised by the anesthesiologist by means of new instruments and techniques.
- 4. When does the surgeon begin the operation?
 - a. He does so when the patient is calm and relaxed.
 - b. He does so when the patient's central nervous system is completely insensitive.
 - c. He does so when the patient has lost consciousness.
 - d. He does so when the patient's pain response had been dulled.

Vocabulary and Usage

Unit 2

1. Give opposite to the words and use the opposite in a sentence.

i. Rare

Opposite: _____

Sentence: _____

ii. Limited

Opposite: _____

Sentence: _____

iii. Outer

Opposite: _____

Sentence: _____

iv. Loss

Opposite: _____

Sentence: _____

v. Coarse

Opposite: _____

Sentence: _____

vi. Absurd

Opposite: _____

Sentence: _____

vii. Casual

Opposite: _____

Sentence: _____

2. Form a noun from the word and use the noun in a sentence

i. Compose

Noun:

Sentence:

ii. Exist

Noun:

Sentence:

iii. Briefly

Noun:

Sentence:

iv. Extent

Noun:

Sentence:

v. Prevent

Noun:

Sentence:

vi. Serve

Noun:

Sentence:

vii. Absurd

Noun:

Sentence:

3. Provide a suitable adverb to the word and use the adverb in a sentence

i. Share

Adverb:

Sentence:

ii. Loose

Adverb:

Sentence:

iii. Compose

Adverb: _____

Sentence: _____

iv. Value

Adverb: _____

Sentence: _____

v. Hang

Adverb: _____

Sentence: _____

vi. Store

Adverb: _____

Sentence: _____

vii. Cross

Adverb: _____

Sentence: _____

Unit 4

1. Explain the difference between the words in pair by using the words in sentences.

a. Intrude: _____

Intervene: _____

b. Dialogue: _____

Discourse: _____

c. Fabricate: _____

Forge: _____

d. Continuous _____

Continual: _____

e. Discover: _____

Invent: _____

f. Person: _____

Personality: _____

g. Idea: _____

Ideal: _____

h. Modal: _____

Model: _____

ایمانات اور عبارت

رکعت نمبر

جماعت
نشتم

عقیدہ آخرت اور تعمیر سرت میں اس کا کردار

درست جواب کا انتخاب کریں۔

س: ۱

الف۔ عقد کے معنی کیا ہیں؟

ب: گرو لگانا۔
د: تعلق

ا۔ چوڑنا
ج: مضبوط کرنا۔

۲۔ ”آخرت“ سے کیا مراد ہے؟

ب: فانی زندگی

د: ہمیشہ رہنے والی۔

الف۔ پہلے آنے والی۔

ج: بعد میں آنے والی۔

۳۔ اللہ تعالیٰ نے انسان کو کیوں پیدا کیا ہے؟

ب: دنیا کو سوار کرنے کے لیے

د: اپنے عبادت کے لیے۔

الف۔ علم کے حصول کے لیے۔

ج: مل جل کر رہنے کے لیے۔

۴۔ مرنے کے بعد جی اٹھنے کا یقین انسان میں کیا پیدا کرتا ہے؟

ب: ہمدردی

د: احساسِ رُمہ داری۔

الف۔ خود پسندی۔

ج: خوش خلقی۔

۵۔ جس دل میں اللہ تعالیٰ کا خوف ہو اسکی کیفیت کیا ہوتی ہے؟

الف: وہاں سے باقی تمام خوف دور ہو جاتے ہیں۔

ب: وہ غماض و بے پرواہ ہو جاتا ہے۔

د: حزن و ملال کا شکار ہو جاتا ہے۔

۶۔ ۴۔ سیامت کے دن حساب و کتاب کا مقصد کیا ہوگا؟

ب: انصاف کے لیے

ج: انسان کو اس کے اعمال کی کمی عمدہ جزا دی جائے۔

الف: عذاب کے لیے۔

۷۔ ہمیشہ کیلئے مٹ جانے کا ڈر انسان کو کیا بناتا ہے؟

ب: بزدل۔

د: لاپرواہ۔

الف: بیادار۔

ج: غمزدہ۔

ایمانیات اور عبادات

جماعت ہشتم

..... عقیدہ آخرت اور تعمیر سیرت میں اُس کا کردار
سوال نمبر ۲۔ درج ذیل سوالات کے مختصر جوابات تحریر کریں۔

۱۔ عقیدہ سے کیا مراد ہے؟

۲۔ نیک لوگوں کو قیامت کے دن نامہ اعمال کس یا قوم میں دیا جائے گا؟

۳۔ قرآن حکیم کے مطابق نیلوکار اور بدکردار کہاں کہاں بیٹھے؟

۴۔ عقیدہ آخرت پر اسلام میں بہت زیادہ زور کیوں دیا گیا ہے؟

۵۔ عقیدہ آخرت کے بارے میں ایک قرآنی آیت مع ترجمہ لکھیں۔

۶۔ عقیدہ آخرت کس طرح ہماری انفرادی زندگی کو بہتر بناتا ہے؟

جماعت
نہتم

خُلُقِ عَظِيمِ

سوال نمبر ۲۔ درج ذیل سوالات کے مختصر جوابات تحریر کریں۔

(۱) حضور مہدی اللہ علیہ وآلہ وسلم کی اطاعت کے بارے میں ایک ایت قرآنی لکھیں۔

(۲) فتح مکہ کے موقع پر آپ نے مکہ والوں کے ساتھ کیسا سلوک کیا فرمایا؟

3. خُلُق سے کیا مراد ہے؟

4. اسام غزالی رحمۃ اللہ علیہ نے اخلاق کی تعریف کس طرح کی ہے؟

5. آپ کو تمام جہانوں کیسے کیا بنا کر بھیجا گیا ہے؟

6. ہم کس طرح اُسوۂ رسول مہدی اللہ علیہ وآلہ وسلم پر عمل کر کے اپنی زندگی میں بہتری لاسکتے ہیں؟

س ۲۔ درج ذیل سوالات کے مختصر جوابات تحریر کریں۔

۱۔ تحمّل کے کیا معنی ہیں؟

۲۔ صبر کی اقسام کون سی ہیں؟

۳۔ شعبِ اہل طالب کسے کہتے ہیں؟

۴۔ حضرت حمزہ رضی اللہ عنہ کو کس موقع پر اور کس نے شیعہ کیا؟

۵۔ ہم کس طرح بنی اکرم صلی اللہ علیہ وآلہ وسلم کے اسوۂ صبر و تحمّل کو اپنی روزمرہ زندگی میں اپنا سکتے ہیں؟

جماعت
ہشتم

اخلاص و تقویٰ

رک شیٹ ⑤

سوال نمبر

درست جواب کا انتخاب کریں۔

1. لَنْ يَنَالَ اللَّهُ لُحُومُهُمْ وَلَا دِمَائُهُمْ وَلَكِنْ يَنَالُهُ التَّقْوَىٰ مِنْكُمْ ۚ

سے کیا معنی ہے ؟

الف : اللہ تعالیٰ تک نہ ان کا گوشت پہنچتا ہے اور نہ خون بلکہ اس تک تمیاری پر پزیرگاری پہنچتی ہے۔

ب : اے ایمان والو اللہ سے ڈرو اور سیدھی بات کہو۔

ج : بے شک پر پزیرگاروں کے لیے کامیابی ہے۔ د : اللہ تعالیٰ کے نزدیک پر پزیرگاروں کا مقام ہے۔

2. طَبَعَةُ الْوَدَعِ کے موقع پر محابہ کرام کی تعداد کیا تھی ؟

الف : ایک لاکھ

ب : تین لاکھ

ج : ایک لاکھ چوبیس ہزار

د : ایک لاکھ پانچ ہزار

3. "لو ائز حد قبالت کے دن کون سے نبی علیہ السلام کے ہاتھ میں عطا کی جائے گی ؟

الف : حضرات ابراہیم علیہ السلام

ب : حضرت نوح علیہ السلام

ج : حضرت عیسیٰ علیہ السلام

د : حضرت محمد صلی اللہ علیہ وسلم

4. وہا کو سا غزوہ تھا جس میں شرکت کی استدعا لیکر جینا دار مگر مخلص محابہ کرام اعی اللہ عنہم نبی اکرم صلی اللہ علیہ وآلہ وسلم کی پس تشریف لائے ؟

الف : غزوہ بدر

ب : غزوہ اُحد

ج : غزوہ بنو نضیر

د : غزوہ حنین

5. قرآن مجید — کے لیے ہدایت ہے۔

الف : غازیوں

ب : روزہ داروں

ج : مسافروں

د : متقیوں

6. قرآن مجید کے مطابق اللہ تعالیٰ کے نزدیک صاحب عزت کون لوگ ہیں ؟

الف : متقی

ب : پاک صاف دینے والے

ج : دولت مند

د : خوب صورت

سب ۲۔ درج ذیل سوالات کے مختصر جوابات تحریر کریں۔

۱۔ ایمان والوں کو اللہ سے ڈرتے ہوئے کس طرح کی بات کرنی چاہیئے؟

۲۔ حضور اکرم صلی اللہ علیہ وسلم کے رفیقے میں کس بات کی اہمیت بیان کی جاتی تھی؟

۳۔ اعلان نبوت سے پہلے آپ حضور اکرم صلی اللہ علیہ وآلہ وسلم کے اخلاق کے بارے میں کیا جانتے ہیں؟

۴۔ خزانہ نبوت کے موقع پر جب ایک صحابی رسول صلی اللہ علیہ وآلہ وسلم نے آپ کی خدمت اقدس میں دن بھر کی مزدوری کے عوض کچھو ریں پیش کیں تو آپ نے کس طرح ردِ عمل کا مظاہرہ فرمایا؟

۵۔ ہم کس طرح اپنی زندگی میں اخلاص و تقویٰ سے کام لیکر اپنی زندگی کو بہتر بنا سکتے ہیں؟

درک شدہ ۱۱) امر بالمعروف و نہی عن المنکر

سوال نمبر ۱ مختصر جواب دیں ۔
۱۔ حضرت حسن بصری رحمۃ اللہ علیہ نے امر بالمعروف و نہی عن المنکر کے بارے کیا فرمایا ہے ؟

۲۔ ہر انسان معاشرے میں کس چیز کا ذمہ دار ہے ؟

۳۔ امر بالمعروف اور نہی عن المنکر کی دو شرائط بتائیں

۴۔ امر بالمعروف اور نہی عن المنکر کے سلسلے میں میڈیا کیا کردار ادا کر سکتا ہے ؟

۵۔ اَتَاْمُرُوْنَ النَّاسَ بِالْبِرِّ وَتَنْهَوْنَ النَّاسَ عَنِ الْفَسَادِ میں کیا حکم دیا گیا ہے ؟

سوال نمبر ۲ :- خاکی جگہ پُر کریں ۔

۱۔ ہم نیکی کا حکم دیں اور بُرائی سے روکیں تاکہ ۔
ہم سے ۔
رامی ہو ۔

۲۔ مال ۔ ج
۳۔ استاد ۔ د
۴۔ بادشاہ ۔ ب

iii مسلم مفکرین نے امر بالمعروف و نہی عن المنکر کو
کا اہم جزو قرار دیا ہے

- و - اردنی ریاست
ج - ملک
ب - سکول
د - کوئی بھی نہیں

iii 1۔ اور مومن مرد اور مومن عورتیں ایک دوسرے کے ہیں

- دو - دشمن
ج - ہم وطن
ب - دوست
د - رشتہ دار

iv خوشخص --- کی پہچان نہ دے سکتا ہو۔ اس پر نہی
کرنا واجب نہیں

- دو - اپنی ذات کی
ج - حرام مال کی
ب - اپنے عمل کی
د - کوئی بھی نہیں

v احسن امر بالمعروف و نہی عن المنکر تمام کی
ذمہ داری ہے۔

- دو - ماں باپ
ج - اساتذہ
ب - بادشاہوں
د - مسلمانوں

سوال نمبر 3 :- اس سبق میں آپ مجھوں کے لیے کیا پیغام ہے

ورک تثبیت (17)

حضرت فاطمہ الزہراء رضی اللہ تعالیٰ عنہا

سوال نمبر ۱۔ ہر سوال کے چار جوابات دیئے ہیں آپ درست پر (✓) لکھیں

۱۔ حضرت فاطمہؑ جنتی عورتوں کی ہیں

- (i) سردار (ii) مال
(ii) شہر اذی (ii) ملک
۲۔ ۷ ہجری میں رسول اللہ ﷺ نے حضرت فاطمہؑ کو ایک کینز دی
(i) حضرت فتنہؑ (ii) حضرت ام سلمہؑ
(iii) حضرت ام سلمہؑ (ii) حضرت زہیرہؑ
۳۔ حضرت فاطمہؑ کے جہیز میں کل چیزوں کی تعداد کیا تھی؟
(i) ۱۵ (ii) ۱۶
(iii) ۲۵ (ii) ۲۶

۴۔ حضرت فاطمہ رضی اللہ تعالیٰ عنہا کی پیدائش بعثت نبویؐ سے کتنے برس پہلے ہوئی
(i) پانچ سال (ii) چھ سال
(iii) آٹھ سال (ii) سات سال

۵۔ حضرت فاطمہؑ کے صاحبزادے تھے

- (i) دو (ii) چار
(iii) تین (ii) پانچ

۶۔ حضرت فاطمہؑ کی والدہ کا نام کیا تھا؟

- (i) حضرت خدیجہ رضی اللہ تعالیٰ عنہا (ii) حضرت ام سلمہ رضی اللہ تعالیٰ عنہا
(iii) حضرت ام کلثوم رضی اللہ تعالیٰ عنہا (ii) حضرت اسماء رضی اللہ تعالیٰ عنہا
۷۔ حضرت فاطمہؑ کا جہیز کا سامان خریدنے کے لیے رسول اللہ ﷺ نے کس شخص کو بھیجا؟
(i) حضرت عمر فاروق رضی اللہ تعالیٰ عنہ (ii) حضرت مقداد بن اسود رضی اللہ تعالیٰ عنہ
(iii) حضرت علی المرتضیٰ رضی اللہ تعالیٰ عنہ (ii) حضرت عثمان رضی اللہ تعالیٰ عنہ

۸۔ حضرت فاطمہؑ کا مشہور لقب ہے

- (i) ام العقیقین (ii) ام الحسین
(iii) ام الائمہ (ii) سیدۃ النساء العالمین

۹۔ حضرت فاطمہؑ کا جہیز کا سامان خرید دیا گیا؟

- (i) حضرت علیؑ کی زرہ بیچ کر (ii) زرہ بیچ کر
(iii) حضرت علیؑ کا گھوڑا بیچ کر (ii) حضرت محمدؐ کی زرہ بیچ کر

۱۵۔ حضرت فاطمہ رضی اللہ تعالیٰ عنہا کی شادی کے بعد عورتیں انہیں طعنہ دیتیں۔

(۱) یہودی عورتیں (۱۱) عیسائی عورتیں

(۱۲) قریش کی عورتیں (۱۷) منافق عورتیں

سوال نمبر ۲: درج ذیل سوالات کے جواب لکھیں
۱۔ حضرت فاطمہ رضی اللہ تعالیٰ عنہا کے جینر کی چیزوں کے نام لکھیں

۲۔ حضرت فاطمہ رضی اللہ تعالیٰ عنہا کی اولاد کے نام لکھیں

۳۔ حضرت فاطمہ رضی اللہ تعالیٰ عنہا کی وفات کب اور کہاں ہوئی؟

۴۔ حضرت فاطمہ رضی اللہ تعالیٰ عنہا کے بارے میں دو احادیث لکھیں؟

۵۔ حضرت فاطمہ رضی اللہ تعالیٰ عنہا کے نقابات لکھیں

۶۔ حضرت فاطمہ رضی اللہ تعالیٰ عنہا کی زندگی میں ہمارے لیے کیا نمونہ ہے۔

۷۔ حضرت فاطمہ رضی اللہ تعالیٰ عنہا کے بچپن کے بارے میں بتائیں

۸۔ حضرت ام سلمہ رضی اللہ تعالیٰ عنہا نے حضرت فاطمہ رضی اللہ تعالیٰ عنہا کے بارے میں کیا فرمایا؟

۹۔ حضرت فاطمہ رضی اللہ تعالیٰ عنہا کا اپنی کنیت سے کیا رویہ تھا؟

BAHRIA MODEL COLLEGE, E-8 , ISLAMABAD.

WEEKLY WORK SCHEDULE (Week -1)

CLASS: VIII

SUBJECT: SOCIAL STUDIES

CHAPTER # 1 : The UNIVERSE

DATE	DAY	TOPICS/ TASKS TO BE COMPLETED
30-3-2020	MONDAY	-Reading of page no. 1 and 2 -Written work - Q-No: 1 , 2 (see guideline)
31-3-2020	TUESDAY	-Reading of page no. 3 and 4 (tree times) -Written work - Q-No: 3 (see guideline)
01-4-2020	WEDNESDAY	-Reading of page no. 3, 4 (underline the important points) -Written work - Q-No: 4 (see guideline)
02-4-2020	THURSDAY	-Reading of page no.5 , 6 , 7 . (three times)
03-4-2020	FRIDAY	-Written work - Q-No: 5 , 6 (see guideline)

BAHRIA MODEL COLLEGE, E-8 , ISLAMABAD.

GUIDELINE (Week -1)

CLASS: VIII

SUBJECT: SOCIAL STUDIES

CHAPTER # 1 : The Universe

Q:1- Draw a labeled diagram of our Solar system.

→● See page no. 2.

Q:2- Define these terms:

Light year , galaxy , nebula, Sun

→● See page no-1 and 2

Q:3- What do you know about the movement of planets round the Sun in our Solar system?

→● See page no-3 (second paragraph)

Q:4- Why do you think life is not possible on Mercury and Venice?

→● See page no-3 , (4th paragraph)

Q:5- Find out about Hubble and Chandra Telescopes and write few lines about each of them.

→● student's task.

Q:6- Briefly explain how Solar and Lunar eclipses are caused? Draw diagrams also.

→● See page no- 6-7.

BAHRIA MODEL COLLEGE, E-8 , ISLAMABAD.

(Week - 2 and 3)

CLASS: VIII

SUBJECT: SOCIAL STUDIES

CHAPTER #2 : The Earth

***** Reading of Chapter (Pages: 8 - 22)**

***** Written work:**

Q:1- Name the main tectonic plates of the Earth.

→● page no. 8. (see map)

Q:2- What happened when the volcano of Krakatoa in Indonesia exploded in 1883?

→● See page no-9 (2nd paragraph)

Q:3- Define and Draw:

The equator , the tropics and the arctic and antarctic circles.

→● See page no- 12, (diagram on page 11)

Q:4- Why oceans are so important for human beings?

→● See page no-13

Q:5- How do oceans affect temperature on land?

→● See page : 14 (regulating the temperature)

* (In summer, the land , it warms up.

In winter, the colder air over the land.)

Q:6- Draw a labeled diagram to show the phenomena of low and high tides.

→● See page no- 15.

Q:7- Write at least three effects of ocean currents.

→● See page no- 17.

Q:8- Explain with examples, what is meant by weathering and how it is caused.

→● See page no- (20-22).